

Get better at Math.
Get better at
everything.



Come experience the Cuemath methodology and ensure your child stays ahead at math this summer.



**Adaptive
Platform**



**Interactive Visual
Simulations**



**Personalized
Attention**

For Grades 1 - 10



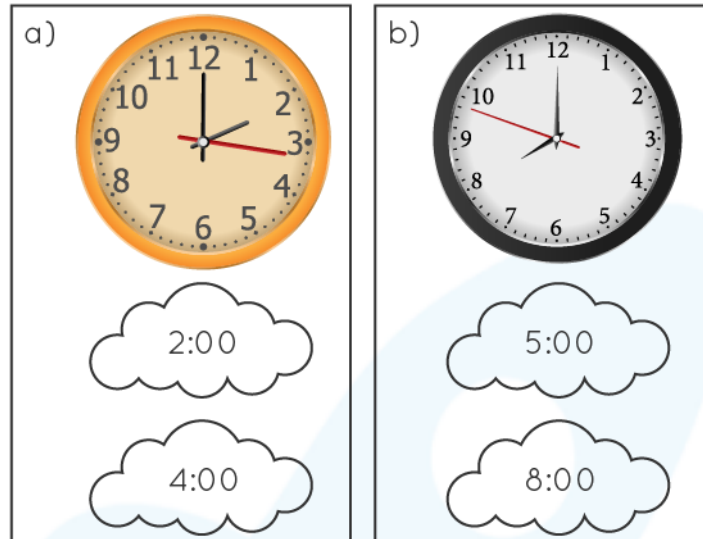
LIVE online classes
by trained and
certified experts.

Get the Cuemath advantage

Book a FREE trial class

Elapsed Time Worksheets 2nd Grade

- 1) Write the time that each clock shows and find the amount of time that has passed between the two times.



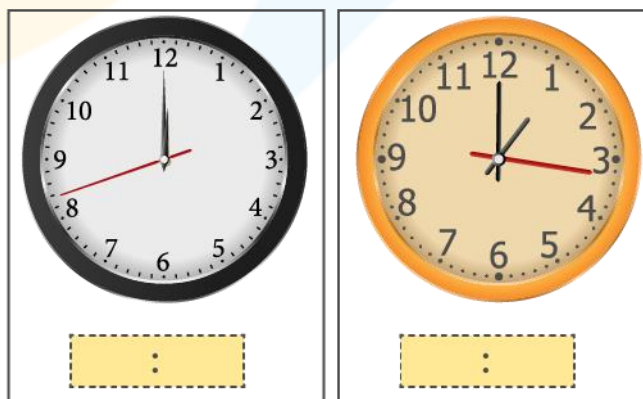
Elapsed time = _____ Hours _____ Minutes

- 2) Write the time elapsed between the given two times.

a) 4 : 00 am to 5:00 am _____ Hours

b) 6 : 00 am to 11 : 00 am _____ Hours

- 3) Write the time that each clock shows and find the amount of time that has passed between the two times.



- 4) Write the elapsed time between the two times.

a) 12 : 00 pm to 4 : 30 pm _____ Hours _____ Minutes

b) 9: 00 pm to 10 : 45 pm _____ Hours _____ Minutes

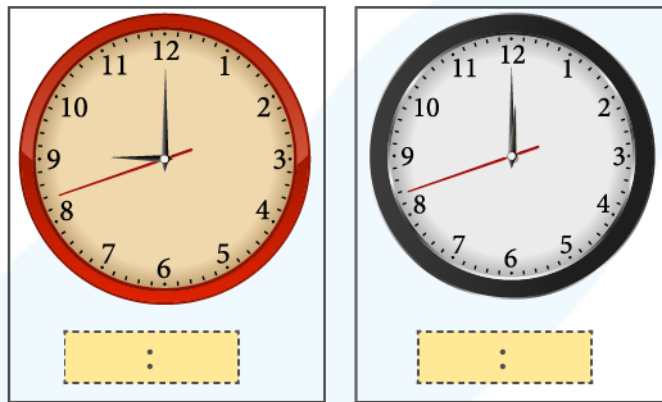
5) Write the elapsed time between the two times.

a) 11 : 00 am to 6 : 15 pm _____ hours _____ minutes

b) 9 pm to 11 : 30 am _____ hours _____ minutes

6) Richard starts to do his school homework at 3 : 30 pm. He spends 45 minutes in doing his math homework and 25 minutes in doing his science home work. How much time has he spent to finish both the homework?

7) Write the elapsed time between the two.



8) Jeff's family is leaving for New York by flight. It takes 2 hours 25 minutes for the flight to reach the destination. If their flight takes off at 10:15 am at what time are they expected to reach the destination?

9) Marci ran a marathon race for 1 hour and 45 minutes. She reached the finishing point at 1:30 pm. What time did she start her marathon?

10) Lisa's birthday party started at 7:00 in the evening. It took around 2 hours and 40 minutes for the party to get over. What is the time at which the party got over?

When you learn math
in an interesting way,
you never forget.



25 Million

Math classes &
counting

100K+

Students learning
Math the right way

20+ Countries

Present across USA, UK,
Singapore, India, UAE & more.

Why choose Cuemath?

"Cuemath is a valuable addition to our family. We love solving puzzle cards. My daughter is now visualizing maths and solving problems effectively!"

- Gary Schwartz

"Cuemath is great because my son has a one-on-one interaction with the teacher. The instructor has developed his confidence and I can see progress in his work. One-on-one interaction is perfect and a great bonus."

- Kirk Riley

"I appreciate the effort that miss Nitya puts in to help my daughter understand the best methods and to explain why she got a problem incorrect. She is extremely patient and generous with Miranda."

- Barbara Cabrera

Get the Cuemath advantage

Book a FREE trial class

**ANSWERS**

1)	Clock 1 shows - 2:00 Clock 2 shows - 8:00 Elapsed time = 6 hours
2)	1 hours 5 hours
3)	Clock 1 shows - 12:00 Clock 2 shows - 1:00 Elapsed time = 1 hour
4)	4 hours and 30 minutes 1 hour and 45 minutes
5)	7 hours and 15 minutes 14 hours and 30 minutes
6)	4 : 40 pm
7)	a) 9:00 b) 12:00 Elapsed time = 3 hours
8)	12:45 pm
9)	12:45 pm
10)	The birthday party got over at 9:40 pm

FUN FACT

1. Hours are usually expressed between 1 and 12.
2. Minutes are expressed between 00 to 59.
3. An hour consists of 60 minutes and a minute consists of 60 seconds.

