

Get better at Math.
Get better at
everything.



Come experience the Cuemath methodology and ensure your child stays ahead at math this summer.



**Adaptive
Platform**



**Interactive Visual
Simulations**



**Personalized
Attention**

For Grades 1 - 10



LIVE online classes
by trained and
certified experts.

Get the Cuemath advantage

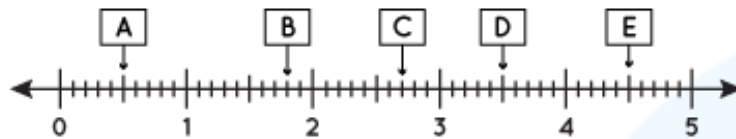
Book a FREE trial class

DECIMALS ON NUMBER LINE WORKSHEET IV

1) Write the decimal show in the image given below:



Answer the following question (2-6) based on the information given in the image shown below:



2) Which decimal point does A represent?

3) Value of B is ____.

4) On subtracting E from D, we get:

a) 0.18 b) 0.7 c) 0.16 d) 0.13

5) The point E represents which decimal point?

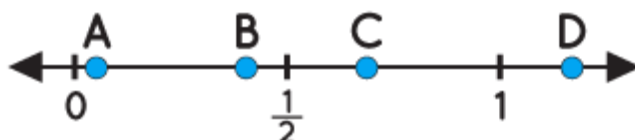
6) Which Letter represents a decimal point which is greater than 0.3 but lesser than 0.7?

7) Plot 6.3 in the number line.

Answer:



8) Which of the given point will best represents if we add 0.1 to 0.9, in the number line?



a) A b) C c) B d) D

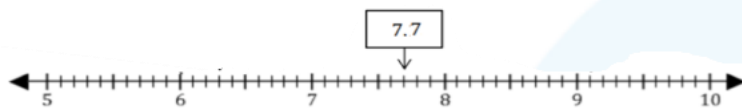
9) Plot 0.5 in the number line.

Answer:



10) What is the position of 7.7 in the number line?

Answer:



When you learn math
in an interesting way,
you never forget.



25 Million

Math classes &
counting

100K+

Students learning
Math the right way

20+ Countries

Present across USA, UK,
Singapore, India, UAE & more.

Why choose Cuemath?

"Cuemath is a valuable addition to our family. We love solving puzzle cards. My daughter is now visualizing maths and solving problems effectively!"

- Gary Schwartz

"Cuemath is great because my son has a one-on-one interaction with the teacher. The instructor has developed his confidence and I can see progress in his work. One-on-one interaction is perfect and a great bonus."


- Kirk Riley

"I appreciate the effort that miss Nitya puts in to help my daughter understand the best methods and to explain why she got a problem incorrect. She is extremely patient and generous with Miranda."

- Barbara Cabrera

Get the Cuemath advantage

Book a FREE trial class

**ANSWERS**

1)	0.34
2)	0.7
3)	0.24
4)	0.16
5)	0.97
6)	C
7)	
8)	d) D
9)	
10)	