

Get better at Math.
Get better at
everything.



Come experience the Cuemath methodology and ensure your child stays ahead at math this summer.



**Adaptive
Platform**



**Interactive Visual
Simulations**



**Personalized
Attention**

For Grades 1 - 10



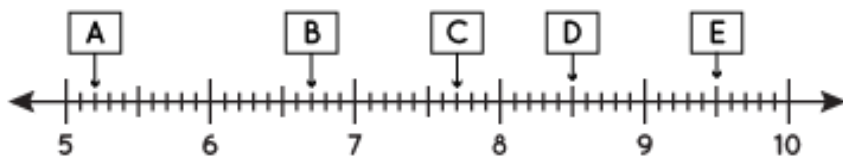
LIVE online classes
by trained and
certified experts.

Get the Cuemath advantage

Book a FREE trial class

DECIMALS ON NUMBER LINE WORKSHEET III

Answer the following question (1-5) based on the information given in the image shown below:



1) Which of the following alphabet represents 3.9?

2) Which decimal point does C represent?

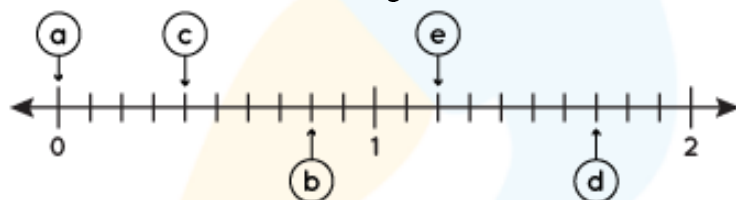
3) On adding A with E, we get ____.

4) On subtracting B from C, we get

a) 0.8 b) 0.7 c) 0.6 d) 1.3

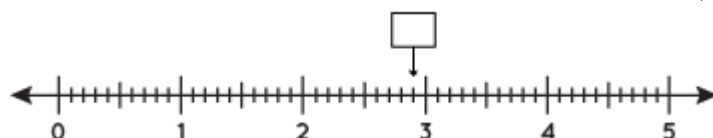
5) Which alphabet shown in the image represents 0.1?

6) Match the following



Alphabet	Decimal value
I. m	i. 5.5
II. n	ii. 6.3
III. o	iii. 5.2
IV. p	iv. 6.5

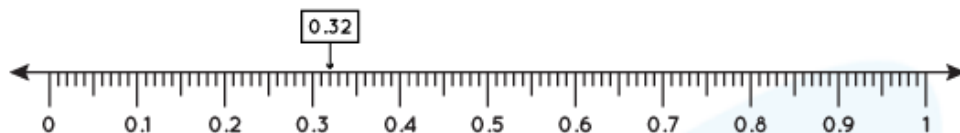
7) Write the decimal shown by the pointer in the image.




8) Locate 9.1 on the number line.
Answer:



9) Locate 0.24 on the number line.
Answer:



10) Locate the decimal number that comes in the exact middle of 0.4 and 0.6
Answer:



When you learn math
in an interesting way,
you never forget.



25 Million

Math classes &
counting

100K+

Students learning
Math the right way

20+ Countries

Present across USA, UK,
Singapore, India, UAE & more.

Why choose Cuemath?

"Cuemath is a valuable addition to our family. We love solving puzzle cards. My daughter is now visualizing maths and solving problems effectively!"

- Gary Schwartz

"Cuemath is great because my son has a one-on-one interaction with the teacher. The instructor has developed his confidence and I can see progress in his work. One-on-one interaction is perfect and a great bonus."


- Kirk Riley

"I appreciate the effort that miss Nitya puts in to help my daughter understand the best methods and to explain why she got a problem incorrect. She is extremely patient and generous with Miranda."

- Barbara Cabrera

Get the Cuemath advantage

Book a FREE trial class

**ANSWERS**

1)	D
2)	3.2
3)	5
4)	d
5)	A
6)	I. ii II. iii III. i IV. iv
7)	5.3
8)	
9)	
10)	