

Get better at Math.
Get better at
everything.



Come experience the Cuemath methodology and ensure your child stays ahead at math this summer.



**Adaptive
Platform**



**Interactive Visual
Simulations**



**Personalized
Attention**

For Grades 1 - 10



LIVE online classes
by trained and
certified experts.

Get the Cuemath advantage

Book a FREE trial class


Decimal Addition Worksheet-4

1. Write any two decimal numbers to complete the equation: $\underline{\quad} + \underline{\quad} = 23.9$

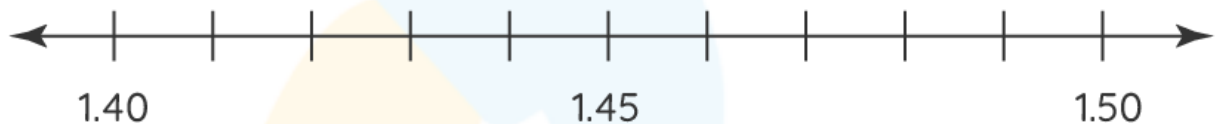
2. Add 2.4 in each of the given numbers and write your answer.

3.9

8.09



3. Add 0.04 to 1.45 using the number line given below.



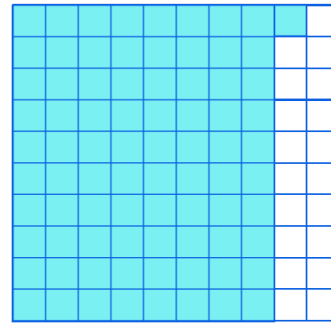
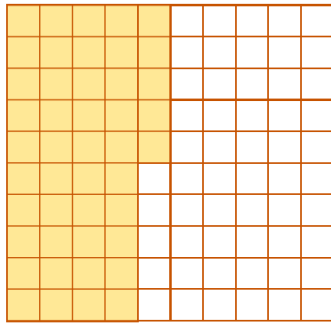
4. Jenny bought 3.12 kilograms of apples and 14.7 kilograms of oranges. How many kilograms of fruits does she have?

5. Match column A with their respective sum in column B.

1) $28.37 + 93.2$	a) 67.21
2) $67.72 + 39.19$	b) 106.91
3) $58.09 + 9.12$	c) 121.57

6. Solve: $89.42 + 43.96 + 8.705$

7. Find the sum of the two decimal numbers represented by the grid given below.



8. Add 3.5 to 8.5 and write your answer in the box provided.

9. State true or false:

$$0.25 + 2.25 = 2.5$$

10. Marie had \$390.987 in her bank account. She deposited \$59.86 more. How much money is in her bank account?

**When you learn math
in an interesting way,
you never forget.**



25 Million

Math classes &
counting

100K+

Students learning
Math the right way

20+ Countries

Present across USA, UK,
Singapore, India, UAE & more.

Why choose Cuemath?

"Cuemath is a valuable addition to our family. We love solving puzzle cards. My daughter is now visualizing maths and solving problems effectively!"

- Gary Schwartz

"Cuemath is great because my son has a one-on-one interaction with the teacher. The instructor has developed his confidence and I can see progress in his work. One-on-one interaction is perfect and a great bonus."


- Kirk Riley

"I appreciate the effort that miss Nitya puts in to help my daughter understand the best methods and to explain why she got a problem incorrect. She is extremely patient and generous with Miranda."

- Barbara Cabrera

Get the Cuemath advantage

Book a FREE trial class



ANSWERS

1)	11.3 and 12.6 (answers may vary)
2)	6.3, 10.49
3)	1.49
4)	17.82 kilograms
5)	1-c, 2-b, 3-a
6)	142.085
7)	1.26
8)	12
9)	True
10)	\$450.847

FUN FACT

1. Even though the time and angle measure is represented in decimal format, they cannot be added or subtracted as decimals.
2. The word "Decimal" is derived from the Latin word Decimus which means one-tenth.
3. Do you know that the value of a decimal does not change on placing a zero after the decimal digits?

