

Get better at Math.
Get better at
everything.



Come experience the Cuemath methodology and ensure your child stays ahead at math this summer.



**Adaptive
Platform**



**Interactive Visual
Simulations**



**Personalized
Attention**

For Grades 1 - 10




LIVE online classes
by trained and
certified experts.

Get the Cuemath advantage

Book a FREE trial class

Counting Numbers Worksheets

1) How many cents does Tia and James have in all?



2) Count and circle the correct number of stars.

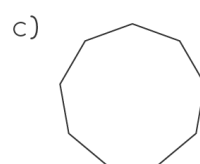
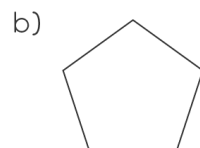
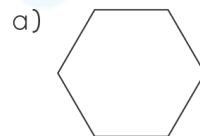


i) 6 ii) 9 iii) 12

3) Count the number of triangles and stars.



4) Count the number of sides for the given shapes.



5) Count the number of ice cream cones.




6) How many books do you see count and write?



7) Count forward by 10s and fill in the missing numbers.

150		170		190		210			240
-----	--	-----	--	-----	--	-----	--	--	-----

8) Count the objects and answer.



How many  ?

--	--

How many  ?

--	--

How many in all?

--	--

9) Count the number of petals in the flower.



10) How many apples are there in all?



When you learn math
in an interesting way,
you never forget.



25 Million

Math classes &
counting

100K+

Students learning
Math the right way

20+ Countries

Present across USA, UK,
Singapore, India, UAE & more.

Why choose Cuemath?

"Cuemath is a valuable addition to our family. We love solving puzzle cards. My daughter is now visualizing maths and solving problems effectively!"

- Gary Schwartz

"Cuemath is great because my son has a one-on-one interaction with the teacher. The instructor has developed his confidence and I can see progress in his work. One-on-one interaction is perfect and a great bonus."

- Kirk Riley

"I appreciate the effort that miss Nitya puts in to help my daughter understand the best methods and to explain why she got a problem incorrect. She is extremely patient and generous with Miranda."





- Barbara Cabrera

Get the Cuemath advantage

Book a FREE trial class

**ANSWERS**

1)	8 Cents
2)	ii) 9 Stars
3)	4 Stars and 4 Triangles
4)	a) 6 sides b) 5 sides c) 9 sides
5)	5 ice cream cones
6)	10 Books

7)	150 <u>160</u> 170 <u>180</u> 190 <u>200</u> 210 <u>220</u> <u>230</u> 240
8)	<div>   </div> <div> <p>How many  ?</p> <p><input type="text" value="4"/> <input type="text" value="Four"/></p> <p>How many  ?</p> <p><input type="text" value="3"/> <input type="text" value="Three"/></p> <p>How many in all?</p> <p><input type="text" value="7"/> <input type="text" value="Seven"/></p> </div>
9)	6 Petals
10)	4 Apples

FUN FACT

1. Numbers can be easily learnt using number skills like matching, sorting, classifying, ordering, counting and comparing.
2. You can count 1 to 10 easily using fingers of your hands
3. To write a number in words, first read the number and write the number name as you say it.

