

Get better at Math.  
Get better at  
everything.



Come experience the Cuemath methodology and ensure your child stays ahead at math this summer.



**Adaptive  
Platform**



**Interactive Visual  
Simulations**



**Personalized  
Attention**

For Grades 1 - 10




LIVE online classes  
by trained and  
certified experts.

Get the Cuemath advantage

**Book a FREE trial class**

## Counting in Tens Worksheet

Q.1. Count the number of pencils in tens.



- a. 60
- b. 70
- c. 80
- d. 90

Q.2. Count the number of gift boxes in tens.



- a. 50
- b. 60
- c. 70
- d. 80

Q.3. Count forward in tens.

45	55			
----	----	--	--	--

Q.4. Count forward in tens and fill in the missing numbers in the boxes.

135				95
-----	--	--	--	----


Q.5. Count backward in tens and fill in the missing numbers.

121	111	101		
-----	-----	-----	--	--


Q.6. Count backward in tens and fill in the missing numbers.

300	290			
-----	-----	--	--	--

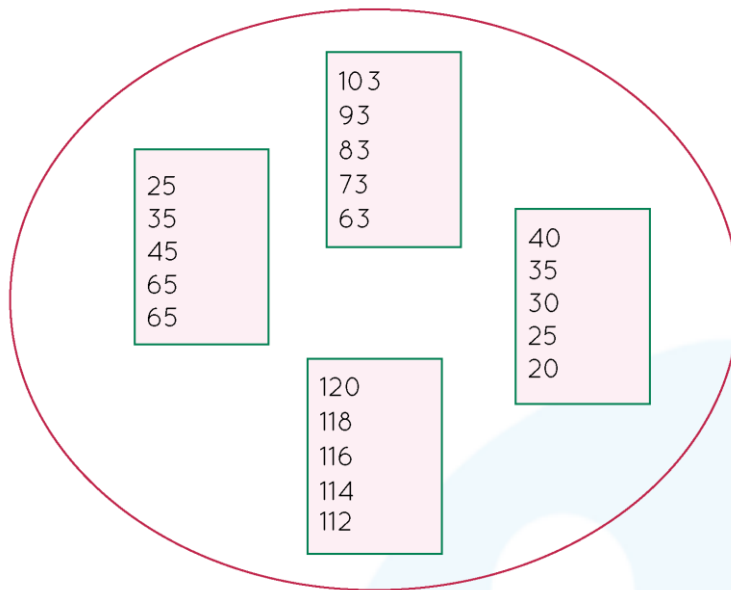
Q.7. Fill the missing number in the balls by counting forward in tens.



Q.8. Fill in the missing numbers in the flowers by forward counting.



Q.9. Tick the correct box which has numbers in the pattern of backward counting in tens.



Q.10. Check if the following backward counting in tens is correct. If it is incorrect, find the correct series of numbers.

85	75	65	55	35	25
----	----	----	----	----	----

When you learn math  
in an interesting way,  
you never forget.



**25 Million**

Math classes &  
counting

**100K+**

Students learning  
Math the right way

**20+ Countries**

Present across USA, UK,  
Singapore, India, UAE & more.

## Why choose Cuemath?

"Cuemath is a valuable addition to our family. We love solving puzzle cards. My daughter is now visualizing maths and solving problems effectively!"

- Gary Schwartz

"Cuemath is great because my son has a one-on-one interaction with the teacher. The instructor has developed his confidence and I can see progress in his work. One-on-one interaction is perfect and a great bonus."

- Kirk Riley

"I appreciate the effort that miss Nitya puts in to help my daughter understand the best methods and to explain why she got a problem incorrect. She is extremely patient and generous with Miranda."

- Barbara Cabrera

Get the Cuemath advantage

**Book a FREE trial class**

**ANSWERS**

1)	90
2)	80
3)	65, 75, 85
4)	125, 115, 105
5)	91, 81
6)	280, 270, 260



7)	Missing numbers are 312, 332, 342, 362
8)	The missing numbers are 35, 45, 55, 75, 95
9)	The box that has the numbers 100, 90, 80, 70 is correct
10)	The correct series of numbers are 85, 75, 65, 55, 45, 35

## FUN FACT

1. To practice counting take some random objects from your home and start saying one number for every object.
2. To count forward by tens, add 10 to every number.
3. To count backwards by tens, subtract 10 from every number.

