

Get better at Math.
Get better at
everything.



Come experience the Cuemath methodology and ensure your child stays ahead at math this summer.



**Adaptive
Platform**



**Interactive Visual
Simulations**



**Personalized
Attention**

For Grades 1 - 10











LIVE online classes
by trained and
certified experts.

Get the Cuemath advantage

Book a FREE trial class

COUNTING COINS WORKSHEETS

Q.1) Identify and write the correct names of the coins using the help box.

	Dime	Quarter	Nickel	Penny	
a)			=	_____	
b)			=	_____	
c)			=	_____	
d)			=	_____	


Q.2) Match the following:

a.) Penny	i.) 5 cents
b.) Nickel	ii.) 1 cent
c.) Dime	iii.) 25 cents
d.) Quarter	iv.) 10 cents


Q.3) Can you find the quarters and draw a circle around them?



Q.4) Count the coins and write the value in cents.



Q.5) Count the coins and write the total amount in cents.



Q.6) Count the nickels and pennies and fill in the blanks.

<p>a)</p> 	<p><input type="text"/> pennies + <input type="text"/> nickels</p>
---	--

<p>b)</p> 	<p><input type="text"/> pennies + <input type="text"/> nickel</p>
---	---

Q.7) Count the coins and match them.

<p>a)</p> 	<p>i.) 2 nickels</p>
<p>b)</p> 	<p>ii.) 3 dimes</p>
<p>c)</p> 	<p>iii.) 2 pennies</p>

Q.8) Sandra has 3 pennies, Riya has 2 dimes, and Ruth has 3 quarters. Can you spot and circle Sandra's coins?

<p>a)</p> 	<p>b)</p> 	<p>c)</p> 
---	--	---

Q.9) State true or false.

- a.) 2 quarters = 50 cents
- b.) 2 nickels = 20 cents

Q.10) Fill in the blanks.

- a.) 3 dollars = _____ cents
- b.) 1 nickel = _____ cents



**When you learn math
in an interesting way,
you never forget.**



25 Million

Math classes &
counting

100K+

Students learning
Math the right way

20+ Countries

Present across USA, UK,
Singapore, India, UAE & more.

Why choose Cuemath?

"Cuemath is a valuable addition to our family. We love solving puzzle cards. My daughter is now visualizing maths and solving problems effectively!"

- Gary Schwartz

"Cuemath is great because my son has a one-on-one interaction with the teacher. The instructor has developed his confidence and I can see progress in his work. One-on-one interaction is perfect and a great bonus."

- Kirk Riley

"I appreciate the effort that miss Nitya puts in to help my daughter understand the best methods and to explain why she got a problem incorrect. She is extremely patient and generous with Miranda."

- Barbara Cabrera

Get the Cuemath advantage

Book a FREE trial class

**ANSWERS**

1)	a.) Nickel b.) Dime c.) Penny d.) Quarter
2)	a-ii b-i c-iv d-iii
3)	a, b, d and g are quarters.
4)	a.) 75 cents b.) 2 cents
5)	a.) 3 dimes = 30 cents b.) 2 pennies = 2 cents
6)	a.) 2 pennies + 2 nickels b.) 2 pennies + 1 nickel

7)	a-iii b-i c-ii
8)	a.) Sandra has 3 pennies
9)	a.) True b.) False
10)	a.) 300 cents b.) 5 cents

FUN FACT

1. Do you know that the US mint makes more coins and medals than any other mint in the world?
2. Pennies are made with a metal called Zinc, coated with copper.
3. US President Abraham Lincoln was the first president to appear on a US coin.

