

Get better at Math.  
Get better at  
everything.



Come experience the Cuemath methodology and ensure your child stays ahead at math this summer.



**Adaptive  
Platform**



**Interactive Visual  
Simulations**



**Personalized  
Attention**

For Grades 1 - 10



LIVE online classes  
by trained and  
certified experts.

Get the Cuemath advantage

**Book a FREE trial class**


## Comparing Numbers Worksheets 2nd Grade

Q1) Put the correct signs  $>$ ,  $<$  or  $=$

a)  $765$  \_\_\_\_\_  $999$

Q2) Select the group of objects having maximum items.

a)



b)



c)



Q3) Circle the greatest number in the following list of numbers.

672, 932, 478, 526, 253

Q4) Arrange the numbers from small to big.

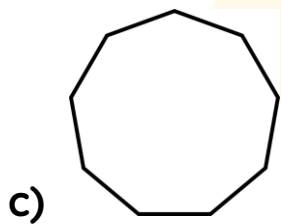
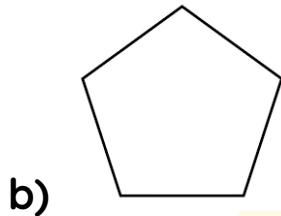
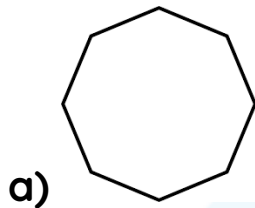
425, 815, 218, 789, 459, 331, 582

Q5) Tim has a parcel weighing 180 KG and Jack has a parcel weighing 890 Kg. Whose parcel is the heaviest?

**Q6) What does  $967 > 584$  mean?**

- a) 967 is greater than 584
- b) 584 is greater than 967
- c) 584 is less than 967
- d) 584 is equal to 967

**Q7) Which of the following shapes has the exact 8 sides?**



**Q8) Select the smallest number from the following options.**

- a) 651
- b) 728
- c) 145
- d) 994

**Q9) Emma had 20 apples and Julie has 24 apples. Who has more number of apples?**

**Q10) Select the statement showing the greatest number.**

**a) Building with 78 floors.**

**b) Hotel with 32 floors.**

**Q11) Which of the following statements is/are correct?**

**a) Nine hundred Ninety-eight is greater than Five hundred Twenty-five**

**b) Eight hundred two is less than Six hundred five**

**c) Six hundred eight is less than two hundred two.**

**d) Five hundred five is equal to Ninety-nine**

**Q12) Select the correct option.**

**a)  $976 > 453$**

**b)  $671 > 923$**

**c)  $576 > 865$**

**d)  $729 > 908$**

**Q13) Which of the following numbers is greater than 278 and less than 789**

- a) 144
- b) 248
- c) 890
- d) 569

**Q14) Fill in the blanks with greater than, less than or equal to.**

- a) Five hundred eight is \_\_\_\_\_ Two hundred eight.
- b) Nine hundred nine is \_\_\_\_\_ Thousand.

**Q15) Match column 1 with the correct symbols in column 2.**

- |                          |      |
|--------------------------|------|
| a) 934 _____ 767         | 1) < |
| b) 892 _____ 999         | 2) > |
| c) 673 _____ $400 + 273$ | 3) = |

When you learn math  
in an interesting way,  
you never forget.



**25 Million**

Math classes &  
counting

**100K+**

Students learning  
Math the right way

**20+ Countries**

Present across USA, UK,  
Singapore, India, UAE & more.

## Why choose Cuemath?

"Cuemath is a valuable addition to our family. We love solving puzzle cards. My daughter is now visualizing maths and solving problems effectively!"

- Gary Schwartz

"Cuemath is great because my son has a one-on-one interaction with the teacher. The instructor has developed his confidence and I can see progress in his work. One-on-one interaction is perfect and a great bonus."

- Kirk Riley

"I appreciate the effort that miss Nitya puts in to help my daughter understand the best methods and to explain why she got a problem incorrect. She is extremely patient and generous with Miranda."

- Barbara Cabrera

Get the Cuemath advantage

**Book a FREE trial class**



**ANSWERS**

1 a) $765 < 999$	2) b	3) 932
4) 218, 331, 425, 459, 582, 789, 815	5) Jack	6) a , c
7) a	8) c	9) Julie
10) a	11) a	12) a
13) d - 569	14) a) greater than 14) b) less than	15) a) - 2) b) - 1) c) - 3)

**FUN FACT**

⌚ While comparing, the number with maximum number of digits is the greatest number.

⌚ Use the place value and face value to compare numbers.

⌚ When comparing numbers When the values are same we use the “=” sign.

Example  $5 = 5$

