

Get better at Math.
Get better at
everything.



Come experience the Cuemath methodology and ensure your child stays ahead at math this summer.



**Adaptive
Platform**



**Interactive Visual
Simulations**



**Personalized
Attention**

For Grades 1 - 10



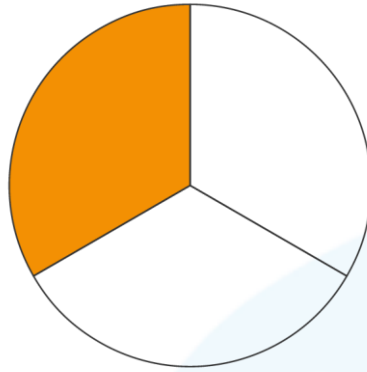
LIVE online classes
by trained and
certified experts.

Get the Cuemath advantage

Book a FREE trial class

Comparing Fractions Worksheets 4th Grade

- 1) Which of the following fractions is greater than the fraction represented by given figure:



- a) $\frac{1}{8}$ b) $\frac{2}{8}$ c) 1 d) $\frac{1}{2}$

- 2) Compare: $\frac{5}{4}$ and $\frac{7}{6}$

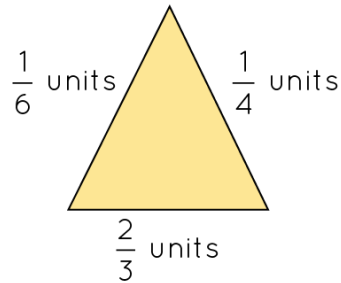
- 3) Is the sum of $\frac{14}{5}$ and $\frac{1}{15}$ less than a whole?

- 4) State true or false:

$$5\frac{1}{2} = \frac{11}{2}$$

- 5) Jill lives $2\frac{1}{5}$ miles away from school whereas Rachel's home is $\frac{12}{4}$ miles far from school. Who lives closer to the school?

6)) Is the perimeter of the triangle given below more than $\frac{1}{2}$? Justify your answer.



7) Arrange the following in descending order:

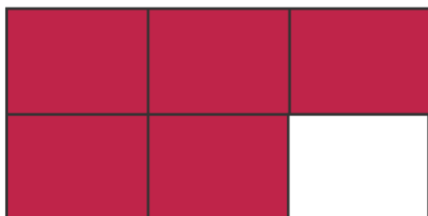
$$1\frac{1}{4}, 1\frac{1}{2}, \frac{1}{12}, 3\frac{1}{2}$$

8) Fill in the box with correct symbol: $<$, $>$, $=$

$$\frac{5}{20} \quad \boxed{\phantom{<}} \quad \frac{15}{60}$$

9) Jenny and Sam are best friends. One day they decide to donate some part of their pocket money for charity. Sam donates one fifth of his pocket money whereas Jenny donates two third of her pocket money. If the pocket money of Sam and Jenny are \$40 and \$30 respectively, who donated more for the charity?

10) Which of the following option is/are smaller than the fraction represented by given shaded region:



(a) $\frac{2}{4}$ (b) $\frac{4}{5}$ (c) $\frac{5}{6}$

**When you learn math
in an interesting way,
you never forget.**



25 Million

Math classes &
counting

100K+

Students learning
Math the right way

20+ Countries

Present across USA, UK,
Singapore, India, UAE & more.

Why choose Cuemath?

"Cuemath is a valuable addition to our family. We love solving puzzle cards. My daughter is now visualizing maths and solving problems effectively!"

- Gary Schwartz

"Cuemath is great because my son has a one-on-one interaction with the teacher. The instructor has developed his confidence and I can see progress in his work. One-on-one interaction is perfect and a great bonus."


- Kirk Riley

"I appreciate the effort that miss Nitya puts in to help my daughter understand the best methods and to explain why she got a problem incorrect. She is extremely patient and generous with Miranda."

- Barbara Cabrera

Get the Cuemath advantage

Book a FREE trial class



ANSWERS

1)	Both c and d
2)	$\frac{5}{4} > \frac{7}{6}$
3)	$\frac{14}{5} + \frac{1}{15} = \frac{43}{15}$ which is greater than 1 (whole)
4)	True, $5\frac{1}{2} = \frac{5 \times 2 + 1}{2} = \frac{11}{2}$
5)	$\frac{12}{4} = 3 > 2\frac{1}{5}$ Jill lives closer
6)	$\frac{1}{6} + \frac{2}{3} + \frac{1}{4} = \frac{2 + 8 + 3}{12} = \frac{13}{12}$ $\frac{13}{12} > \frac{1}{2}$
7)	$3\frac{1}{2} > 1\frac{1}{2} > 1\frac{1}{4} > \frac{1}{12}$
8)	$\frac{5}{20} = \frac{15}{60}$
9)	Sam's donation = $\frac{1}{5} \times 40 = \8 Jenny's donation = $\frac{2}{3} \times 30 = \20 . Jenny donated more.
10)	options a and b

FUN FACT

1. To compare two or more fractions, find the LCM of denominators and convert them into equivalent fractions.
2. If two fractions have same numerator, then the fraction that has greater denominator is smaller.
3. 1 is greater than every proper fraction.

