

Get better at Math.
Get better at
everything.



Come experience the Cuemath methodology and ensure your child stays ahead at math this summer.



**Adaptive
Platform**



**Interactive Visual
Simulations**



**Personalized
Attention**

For Grades 1 - 10



LIVE online classes
by trained and
certified experts.

Get the Cuemath advantage

Book a FREE trial class

3rd Grade Clock Worksheets

1) Match the time with the clock.

What Time is It?



• 02:50



• 05:45



• 07:15



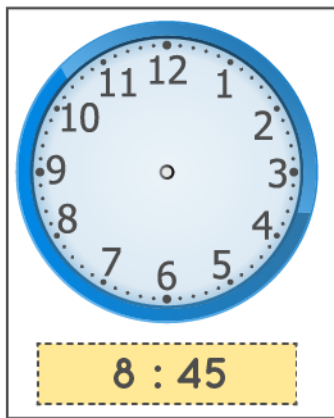


• 11:20

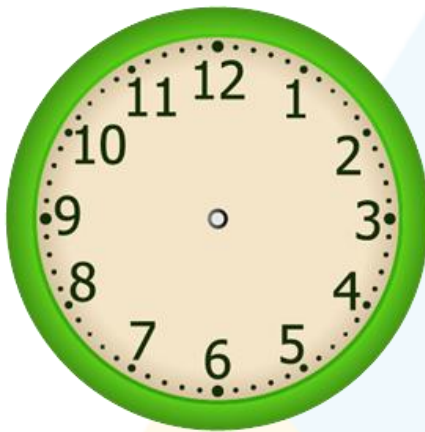
2) How much time passes from 1: 25 to 3:00?

a) 1 hour 30 minutes b) 1 hour 35 minutes c) 1 hour 25 minutes

3) Draw the clock hands to show the time indicated.



4) Alex started his project work at 1:50. He took half an hour to finish it. When would he finish his work? Show the start time and the end time on the clocks.



5) Draw the minutes hand to show the time quarter to 5.



6) Match the times.

Quarter past 7	6:40
Quarter to 6	6:30
Half past 7	7:15
20 minutes to 7	7:30
Half to 7	5:45

7) Steve started to read his book at 3:20. It took 4 and a half hours for him to finish reading the book. At what time did he finish?

- a) 7:30 b) 7:20 c) 7:50

8) Quarter of an hour = ____ minutes

- a) 30 minutes b) 15 minutes c) 45 minutes

9) The duration of the class is 2 and a half hours. If the class gets over at 7:30, when would it have started?

- a) 5 o'clock b) 5:30 c) 6 'o'clock

10) Jennifer goes for a walk at 6:00. If she walks for 1 hour 45 minutes, when will she finish her walk?

- a) 6:45 b) 7:45 c) 7:30

When you learn math
in an interesting way,
you never forget.



25 Million

Math classes &
counting

100K+

Students learning
Math the right way

20+ Countries

Present across USA, UK,
Singapore, India, UAE & more.

Why choose Cuemath?

"Cuemath is a valuable addition to our family. We love solving puzzle cards. My daughter is now visualizing maths and solving problems effectively!"

- Gary Schwartz

"Cuemath is great because my son has a one-on-one interaction with the teacher. The instructor has developed his confidence and I can see progress in his work. One-on-one interaction is perfect and a great bonus."

- Kirk Riley

"I appreciate the effort that miss Nitya puts in to help my daughter understand the best methods and to explain why she got a problem incorrect. She is extremely patient and generous with Miranda."

- Barbara Cabrera

Get the Cuemath advantage

Book a FREE trial class

**ANSWERS**

1)	7:15 11:20 2:50 5:45
2)	1 hour 35 min
3)	short hand between 8 and 9, long hand at 9 short hand between 9 and 10, long hand at 9 short hand between 11 and 12, long hand at 5
4)	1:50 to 2:20
5)	4:45
6)	7:15 5:45 7:30 6:40 6:45

7)	c) 7:50
8)	15 min
9)	5 o'clock
10)	7:45

FUN FACT

1. "o'clock" is a contraction of "stroke of the clock"
2. There are 24 hours in a day.
3. Digital clocks show numbers in LCD and LED displays.

