

Get better at Math.
Get better at
everything.



Come experience the Cuemath methodology and ensure your child stays ahead at math this summer.



**Adaptive
Platform**



**Interactive Visual
Simulations**



**Personalized
Attention**

For Grades 1 - 10



LIVE online classes
by trained and
certified experts.

Get the Cuemath advantage

Book a FREE trial class


Clock Worksheets

1) Which clock shows the time indicated?


a) 1:00	   
---------	--

b) 3:00	   
---------	--


2) Mark the time shown by the clocks.



:

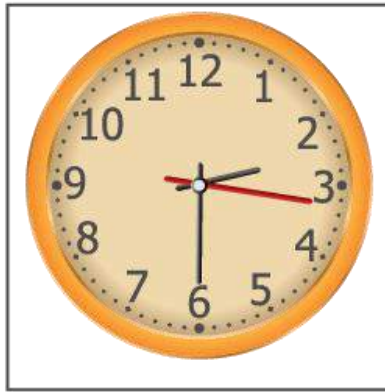


:



:


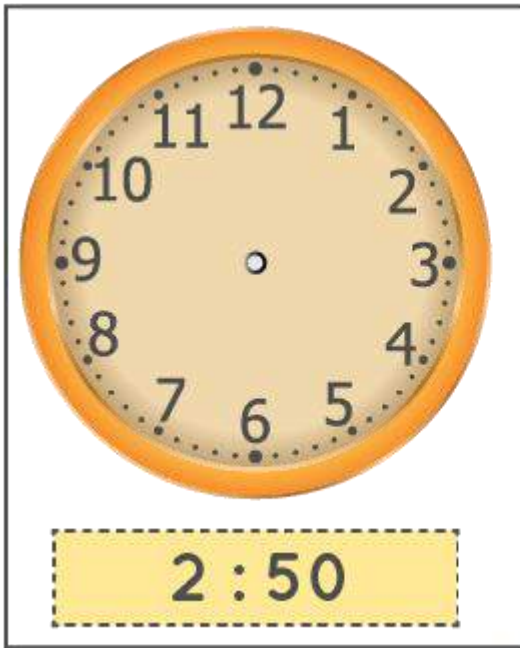
3) Choose the clock that shows the right time.
Steve has his badminton coaching at half-past 3.





4) Choose the clock that shows the right time.
Steve has his math class at half-past 10.



5) Draw the hands of the clock as shown below.




6) Color the time shown.



7) Write the digital time.



8) Mark the minutes hand.



9) What time is it?

What time is it?



o'clock



o'clock



o'clock



o'clock




o'clock



o'clock

10) Write the time in two ways.

WHAT TIME IS IT?



7:00

3:05

10:55

6:35

3:10

9:20

12:35

**When you learn math
in an interesting way,
you never forget.**



25 Million

Math classes &
counting

100K+

Students learning
Math the right way

20+ Countries

Present across USA, UK,
Singapore, India, UAE & more.

Why choose Cuemath?

"Cuemath is a valuable addition to our family. We love solving puzzle cards. My daughter is now visualizing maths and solving problems effectively!"

- Gary Schwartz

"Cuemath is great because my son has a one-on-one interaction with the teacher. The instructor has developed his confidence and I can see progress in his work. One-on-one interaction is perfect and a great bonus."


- Kirk Riley

"I appreciate the effort that miss Nitya puts in to help my daughter understand the best methods and to explain why she got a problem incorrect. She is extremely patient and generous with Miranda."

- Barbara Cabrera

Get the Cuemath advantage

Book a FREE trial class

**ANSWERS**

1)	Third clock shows 1 : 00 First clock shows 3 : 00
2)	2:00 6:00 7:00
3)	First clock shows half past 3.
4)	Third clock shows half past 10.
5)	a) shorthand between 2 and 3, longhand at 10. b) shorthand between 10 and 11, longhand at 2.
6)	1:00 and 6:00

7)	11:30
8)	Long hand is at 12.
9)	2:00 8:00 6:00 4:00 9:00 3:00
10)	7:00- seven o' clock 4:05- 5 minutes after 4 o' clock 12:55- 5 minutes to 1 o'clock 10:35- 35 minutes past 10. 3:10- 10 minutes past 3 9:20- 20 minutes past 9

FUN FACT

1. o'clock" is a contraction of "stroke of the clock"
2. Analogue clocks use angles to tell time. These clocks have hands rotating around the clock's face.
3. Digital clocks show numbers in LCD and LED displays.

