

Get better at Math.  
Get better at  
everything.



Come experience the Cuemath methodology and ensure your child stays ahead at math this summer.



**Adaptive  
Platform**



**Interactive Visual  
Simulations**



**Personalized  
Attention**

For Grades 1 - 10



LIVE online classes  
by trained and  
certified experts.

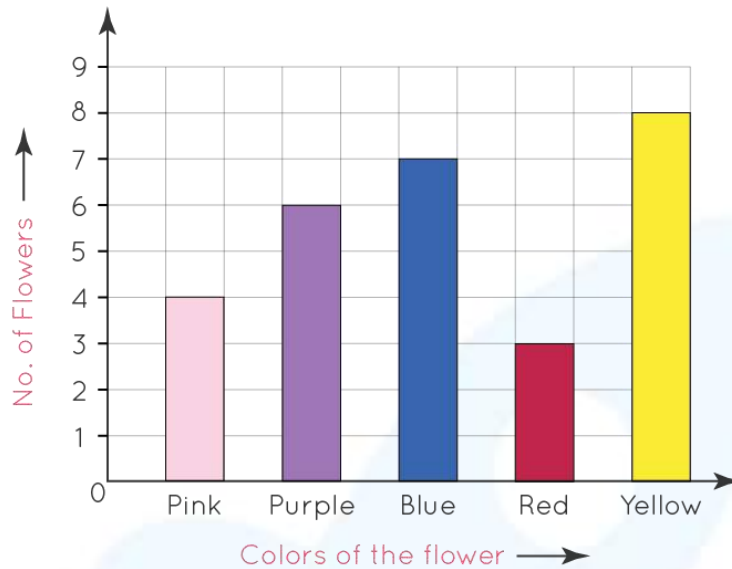
Get the Cuemath advantage

**Book a FREE trial class**

## Bar Graph Worksheet 1<sup>st</sup> Grade

1) The bar graph shows flowers in William's garden.

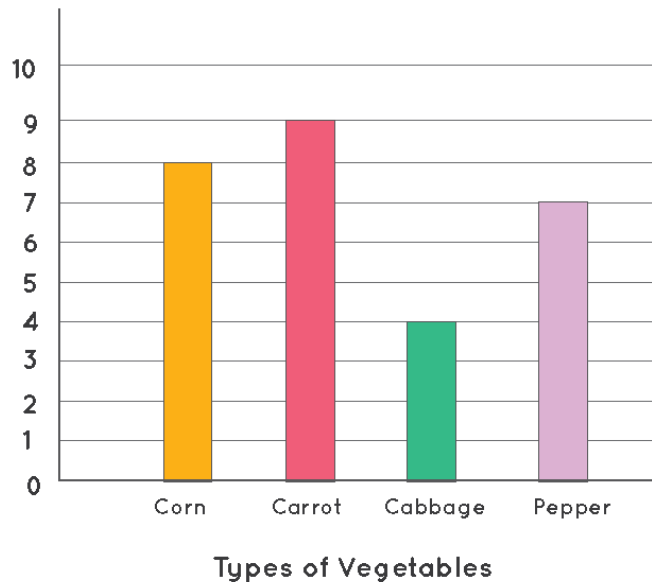
Flowers in William's Garden



Which flowers are greater in number? \_\_\_\_\_

2) The following bar graph shows the vegetables grown by Jack in his backyard.

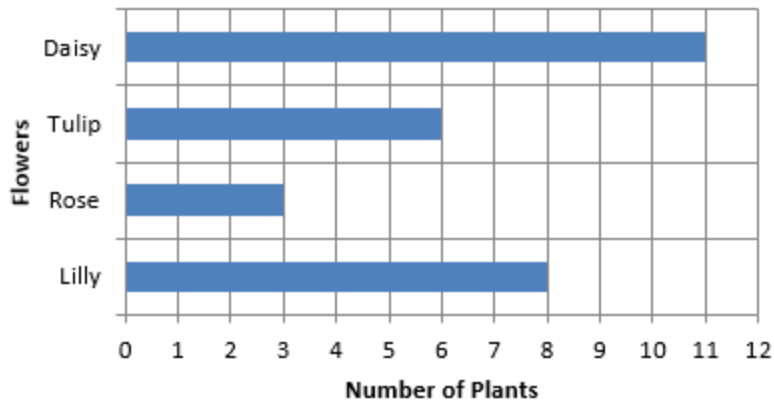
Jack's Garden



How many vegetables did Jack grow in total? \_\_\_\_\_

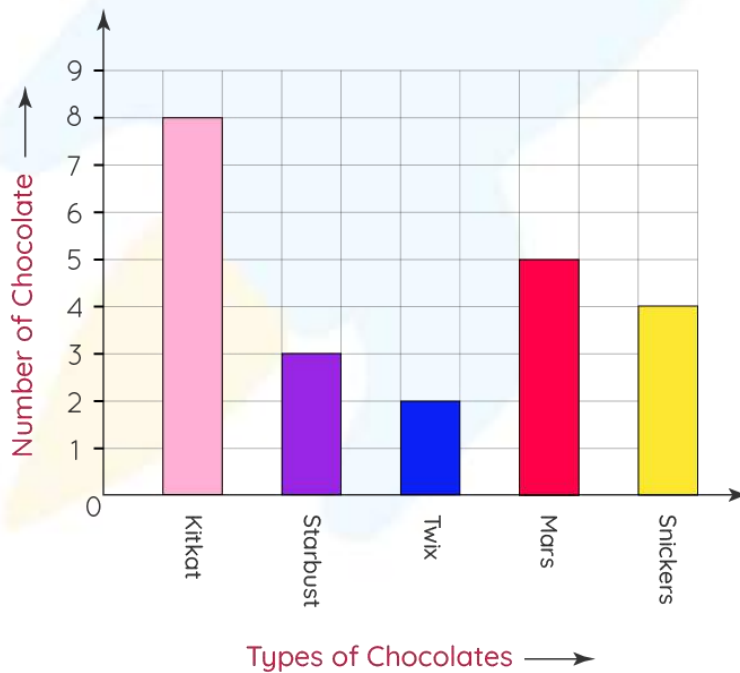
3) Look at the bar graph.

**Flowers in the Garden**



- a. Plants of Rose. \_\_\_\_\_  
b. Plants of Daisy. \_\_\_\_\_

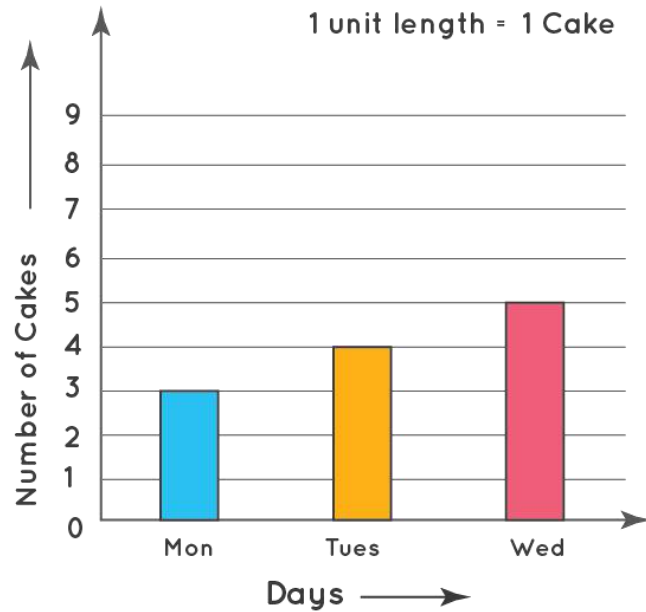
4) Study the graph and answer.



\_\_\_\_\_ chocolate is 4 in number.

- a. Snickers  
b. Starburst

5) Look at the bar graph.

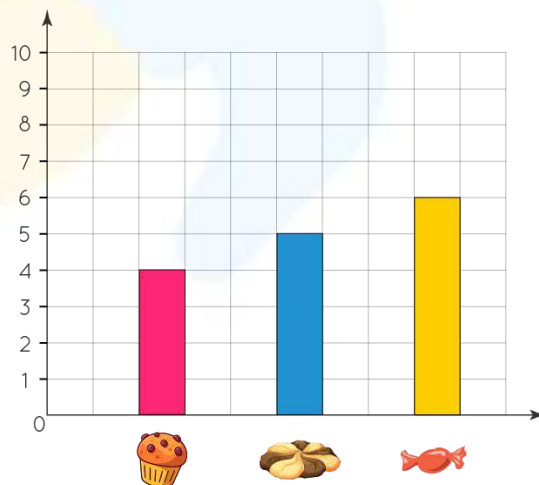


How many cakes were baked on Wednesday? \_\_\_\_\_


6) How do you make graphs?

- By using scale
- Without using scale

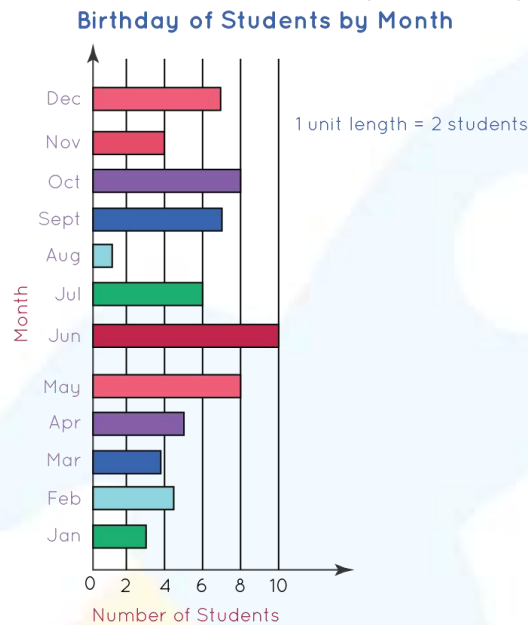
7) Draw the correct number of objects in the box.



8) Draw the graph for the given fruits.

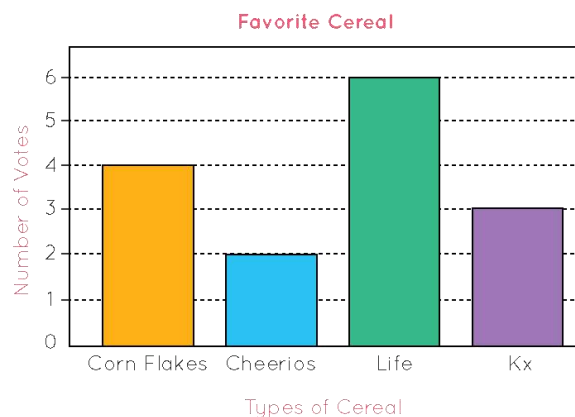


9) How many students have birthdays in May?



- a. 5
- b. 8

10) The bar graph given below represents the information collected from the study regarding the favorite cereal of children.



How many children liked Corn Flakes? \_\_\_\_\_

When you learn math  
in an interesting way,  
you never forget.



**25 Million**

Math classes &  
counting

**100K+**

Students learning  
Math the right way

**20+ Countries**

Present across USA, UK,  
Singapore, India, UAE & more.

## Why choose Cuemath?

"Cuemath is a valuable addition to our family. We love solving puzzle cards. My daughter is now visualizing maths and solving problems effectively!"

- Gary Schwartz

"Cuemath is great because my son has a one-on-one interaction with the teacher. The instructor has developed his confidence and I can see progress in his work. One-on-one interaction is perfect and a great bonus."

- Kirk Riley


"I appreciate the effort that miss Nitya puts in to help my daughter understand the best methods and to explain why she got a problem incorrect. She is extremely patient and generous with Miranda."

- Barbara Cabrera

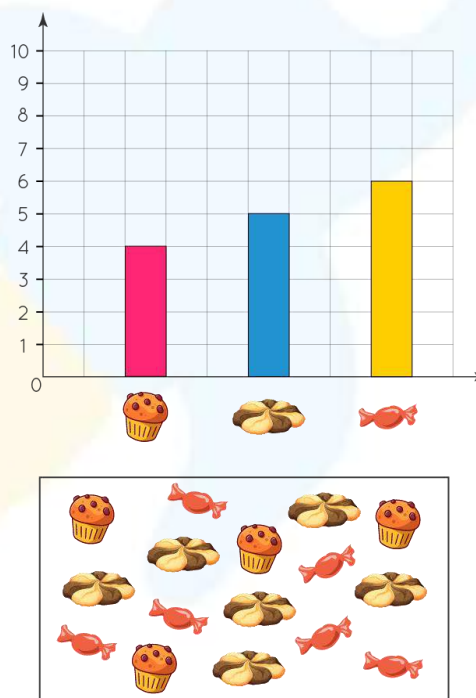
Get the Cuemath advantage

**Book a FREE trial class**

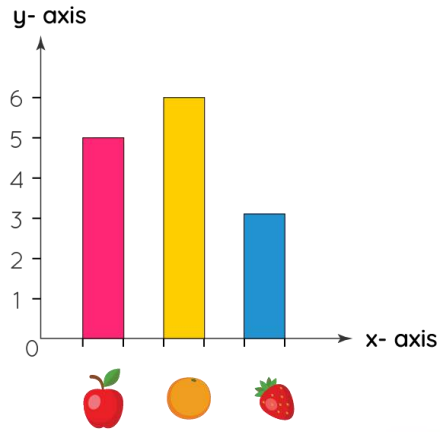




## ANSWERS

1.	Purple
2.	9
3.	a. 3 b. 11
4.	b.
5.	5
6.	a.
7.	

8.



9.

b.

10.

4



## FUN FACT

1. The graphs can be plotted vertically (bars standing up) or horizontally (bars lying flat from left to right), but normally we use vertical bars.
2. All bars must share a common base.
3. If the frequency of data is very large, then bar graphs are always advisable since pictographs become time-consuming and very difficult to make.

