

Get better at Math.
Get better at
everything.



Come experience the Cuemath methodology and ensure your child stays ahead at math this summer.



**Adaptive
Platform**



**Interactive Visual
Simulations**



**Personalized
Attention**

For Grades 1 - 10



LIVE online classes
by trained and
certified experts.

Get the Cuemath advantage

Book a FREE trial class

6th Grade Algebra Worksheets

Questions

- Evaluate the following: $\frac{x+9}{2}$ where $x = 15$ and choose the correct option for x from below:
 - 12
 - 13
 - 11
 - 14
- Identify the coefficients and constants in the following expressions:
 $5c^2 + 9$
- Solve the following equations for a : $a \times 8 = 32$
- Write and evaluate an expression for the problem.
The scores on Dave's first two biology tests are 65 and 81. By how many points did Dave's improve on his second test?
- Determine the first expression to evaluate in: $5 \times 3 \div (2 + 4)^2$
- The distance between Chicago and New York is 100 miles less than 3 times the distance between New York and Miami. If m is the distance between New York and Miami, which expression can be used to denote distance between Chicago and New York?
 - $100 - 2m$
 - $3m - 100$
 - $100m - 3$
 - $2 - 100m$
- Your friend eats 5 apples less than 3 times the amount of apples you do. If you eat 3 apples, find out how much your friend eats?

You





3

Friend



8. Write the following statements as equations/inequalities : x is less than the square of 5 more than twice c

9. Find the cost of the objects

 : \$10 +
  : \$x + 5 = \$25 x =

10. Use the Distributive Property to simplify each expression: $2(x + 9)$

11. Write and simplify an expression that represents the total cost (in dollars) of buying the items shown for each member of a varsity team?(1 T-shirt and a pair of socks per member)

T-shirts



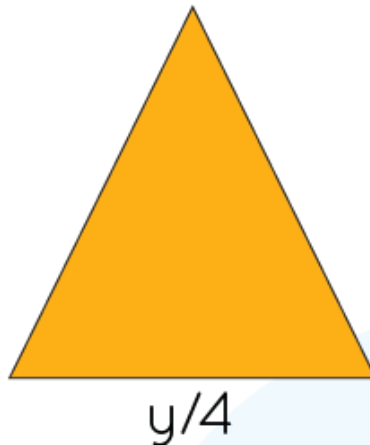
\$24

Socks

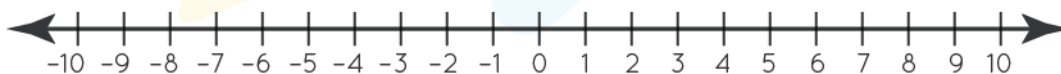


\$4x/single socks

12. ABC is an equilateral triangle with each side measuring 14. Find the value of y .



13. Sean is x years old. His sister, Carol, is 4 years older than Sean. Their Dad, John, is 6 years less than thrice Carol's age. Write and simplify an expression that represents John's age in years.
14. Find an expression for the perimeter of a garden of length $7x$ and breadth $3x + 5$.
15. Solve the following and graph the solution:
 $x + 2 > 7$ and $x + 11 < 4$



**When you learn math
in an interesting way,
you never forget.**



25 Million

Math classes &
counting

100K+

Students learning
Math the right way

20+ Countries

Present across USA, UK,
Singapore, India, UAE & more.

Why choose Cuemath?

"Cuemath is a valuable addition to our family. We love solving puzzle cards. My daughter is now visualizing maths and solving problems effectively!"

- Gary Schwartz

"Cuemath is great because my son has a one-on-one interaction with the teacher. The instructor has developed his confidence and I can see progress in his work. One-on-one interaction is perfect and a great bonus."

- Kirk Riley

"I appreciate the effort that miss Nitya puts in to help my daughter understand the best methods and to explain why she got a problem incorrect. She is extremely patient and generous with Miranda."

- Barbara Cabrera

Get the Cuemath advantage

Book a FREE trial class

ANSWERS

1) 3	2) Coefficients - 4, Constants - 3	3) 4
4) 13	5) $5x^3$	6) $3m - 100$
7) Friend - 250 You - 100	8) $50 = 10x$	9) 30
10) $0.5c - 1$	11) $2x + 10$	12) $a = 44$
13) $3x + 6$	14) $12x + 22$	15) $x > 9, x < -6$

FUN FACT

1. . Algebra was developed by the Greeks and Babylonian mathematicians.
2. Algebra is a Latin word derived from the Arabic word 'Al-Jabr'.
3. The first book on algebra was written in the 9th century by Muhammad ibn Mūsā al-Khwārizmī.

