

Get better at Math.
Get better at
everything.



Come experience the Cuemath methodology and ensure your child stays ahead at math this summer.



**Adaptive
Platform**



**Interactive Visual
Simulations**



**Personalized
Attention**

For Grades 1 - 10



LIVE online classes
by trained and
certified experts.

Get the Cuemath advantage

Book a FREE trial class

Kindergarten Addition Worksheets

Q.1. Find the sum of the number of chocolates given below.



3 Chocolates + 5 Chocolates =

Q.2. Choose the correct option.




- The total number of chocolates in bags are eleven.
- The total number of chocolates in bags are ten.
- The total number of chocolates in bags are six.
- The total number of chocolates in bags are seven.

Q.3. Count and add the following fingers.



Q.4. Add the following.



Q.5. Tick (✓) the incorrect answer.


- a. $3 + 4 = 7$
- b. $4 + 5 = 10$
- c. $2 + 6 = 8$
- d. $2 + 2 = 4$

Q.6. Count the dots on dice and add.




Q.7. Six plus four is ____ .

Q.8. Circle correct answer from the following.



- a. 5
- b. 7

Q.9. Add 2 and 6 and color those numbers of fruits.



Q.10. Is the addition of one and seven, 8?

**When you learn math
in an interesting way,
you never forget.**



25 Million

Math classes &
counting

100K+

Students learning
Math the right way

20+ Countries

Present across USA, UK,
Singapore, India, UAE & more.

Why choose Cuemath?

"Cuemath is a valuable addition to our family. We love solving puzzle cards. My daughter is now visualizing maths and solving problems effectively!"

- Gary Schwartz

"Cuemath is great because my son has a one-on-one interaction with the teacher. The instructor has developed his confidence and I can see progress in his work. One-on-one interaction is perfect and a great bonus."


- Kirk Riley

"I appreciate the effort that miss Nitya puts in to help my daughter understand the best methods and to explain why she got a problem incorrect. She is extremely patient and generous with Miranda."

- Barbara Cabrera


Get the Cuemath advantage

Book a FREE trial class



ANSWERS

1)	8
2)	a.
3)	
4)	<div style="display: flex; align-items: center;"> <div style="margin-right: 20px;"> $\begin{array}{r} 5 \\ + 3 \\ \hline \boxed{8} \end{array}$ </div> <div style="border: 1px solid black; padding: 5px;"> </div> </div>
5)	b.
6)	

7)	Six plus four is ten. $6 + 4 = 10$
8)	a. 5
9)	
10)	Yes

FUN FACT

1. Adding 1 to any number and counting give the same answer.
2. When two same numbers are added or the number is multiplied by 2, the answer is the same. For example, $1 + 1 = 2$ and $1 \times 2 = 2$.

