

Get better at Math.
Get better at
everything.



Come experience the Cuemath methodology and ensure your child stays ahead at math this summer.



**Adaptive
Platform**



**Interactive Visual
Simulations**



**Personalized
Attention**

For Grades 1 - 10



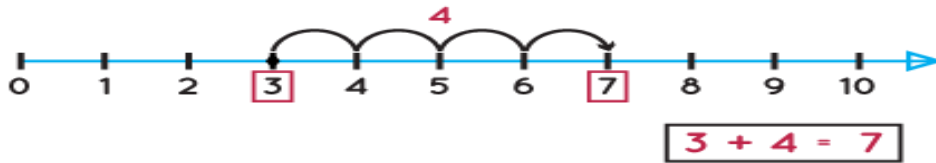
LIVE online classes
by trained and
certified experts.

Get the Cuemath advantage

Book a FREE trial class

Addition Using Number Line Worksheets

1) Below addition shown on number line is true or false.

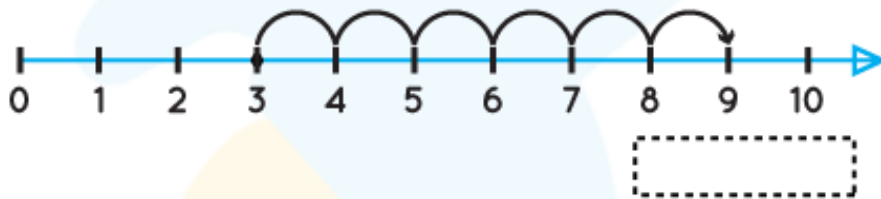


2) Complete the addition statement using number line.

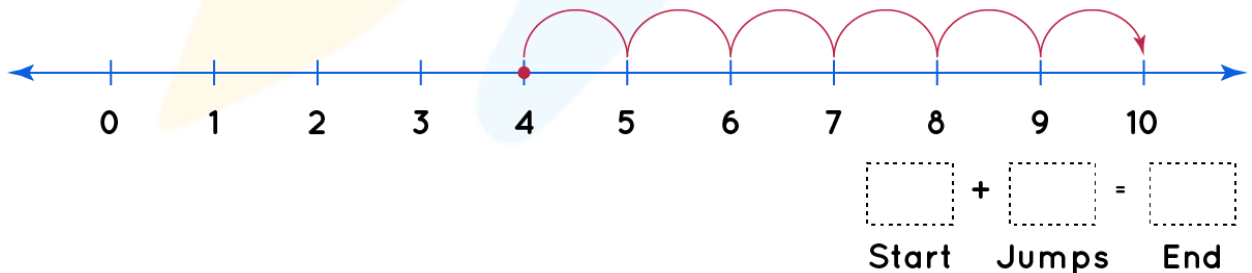
$$4 + 5 = \boxed{}$$



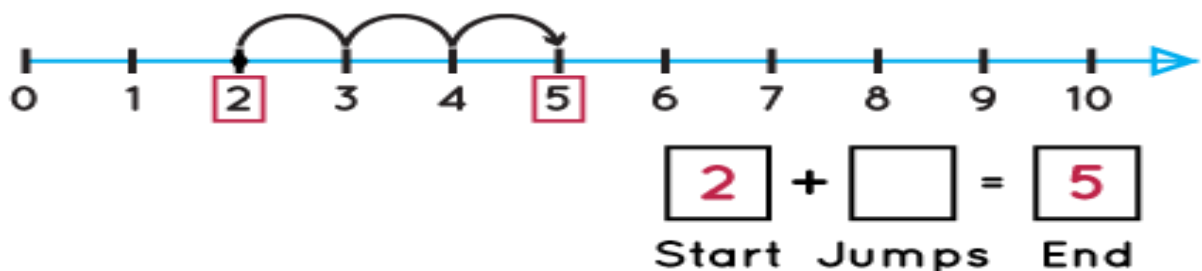
3) Write the addition statement for the following number line.



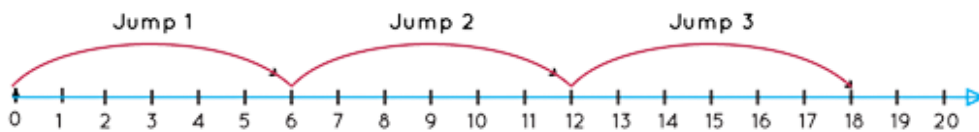
4) Fill the correct numbers in the boxes.



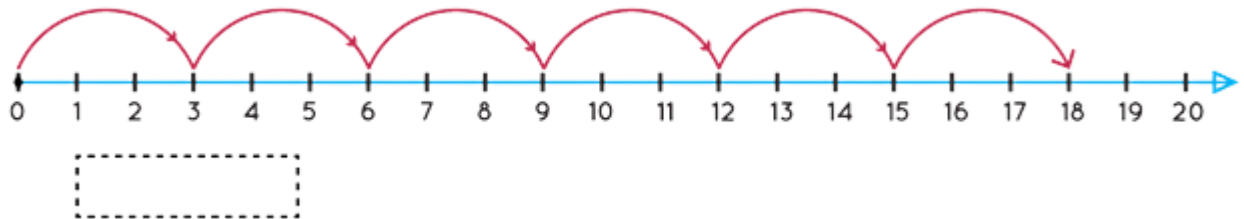
5) Count the number of jumps on the number line.



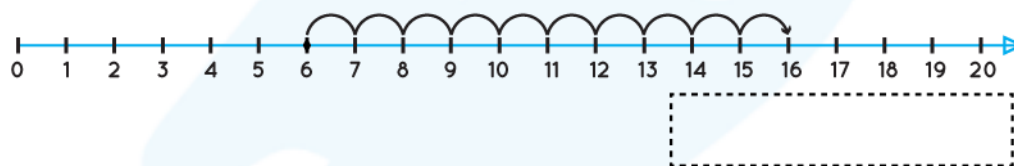
6) Count the slots of each jump and add.




7) Fill the boxes with correct addition statement.



8) Write the addition statement using number line.




9) Divide twelve items into group of three on number line and add the slots of each jump. Write the number of groups formed.



10) Show the addition on number line.

$$6 + 4$$



When you learn math
in an interesting way,
you never forget.



25 Million

Math classes &
counting

100K+

Students learning
Math the right way

20+ Countries

Present across USA, UK,
Singapore, India, UAE & more.

Why choose Cuemath?

"Cuemath is a valuable addition to our family. We love solving puzzle cards. My daughter is now visualizing maths and solving problems effectively!"

- Gary Schwartz

"Cuemath is great because my son has a one-on-one interaction with the teacher. The instructor has developed his confidence and I can see progress in his work. One-on-one interaction is perfect and a great bonus."


- Kirk Riley

"I appreciate the effort that miss Nitya puts in to help my daughter understand the best methods and to explain why she got a problem incorrect. She is extremely patient and generous with Miranda."


- Barbara Cabrera

Get the Cuemath advantage

Book a FREE trial class



ANSWERS

1)	True
2)	$4 + 5 = 9$
3)	$3 + 6 = 9$
4)	Start = 4 Jumps = 6 End = 10
5)	3 Jumps
6)	Number of jumps = 3 Final number = $6 + 6 + 6 = 18$.
7)	$3 + 3 + 3 + 3 + 3 + 3 = 18$
8)	$6 + 10 = 16$.
9)	$3 + 3 + 3 + 3 = 12$ Number of groups = 4
10)	$6 + 4$  $6 + 4 = 10$

FUN FACT

1. Number line is a straight line with numbers on it.
2. On number line, numbers increases left to right.
3. On number line number decreases right to left.
4. We can perform addition and subtraction together on number line.

