

Get better at Math.  
Get better at  
everything.



Come experience the Cuemath methodology and ensure your child stays ahead at math this summer.



**Adaptive  
Platform**



**Interactive Visual  
Simulations**



**Personalized  
Attention**

For Grades 1 - 10



LIVE online classes  
by trained and  
certified experts.

Get the Cuemath advantage

**Book a FREE trial class**

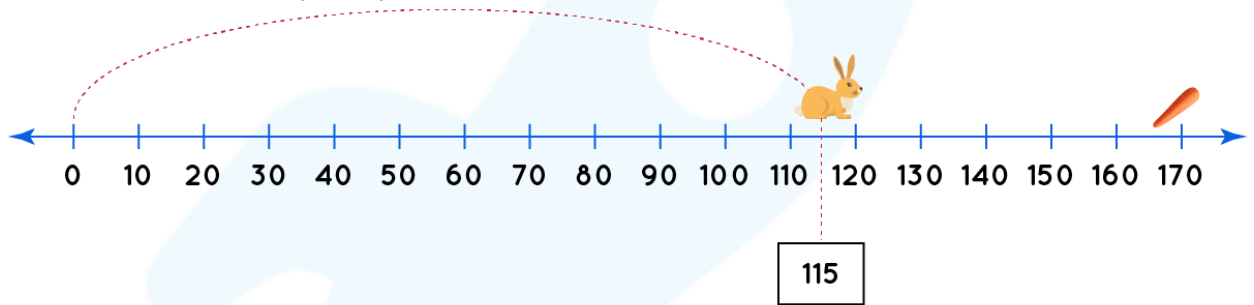
## Addition Using Number Line Worksheets

1) Show below addition on a number line.

$$300 + 500 = \boxed{\phantom{000}}$$

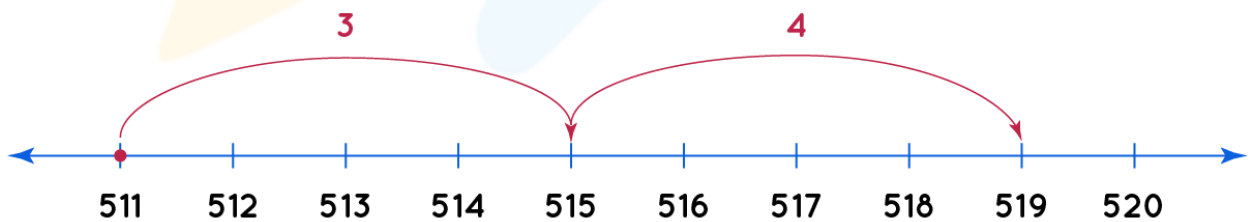


2) Rabbit has jumped 115 steps. How many more steps does Rabbit have to jump to reach the carrot?

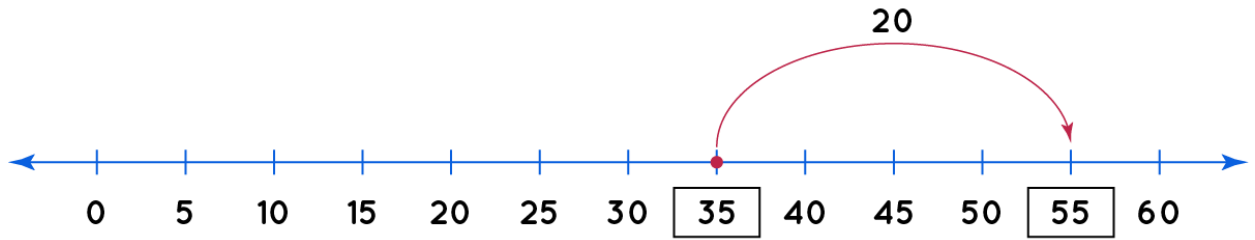


3) Complete the addition statement using the following number line.

$$512 + 3 + 4 = \boxed{?}$$



4) Fill the correct numbers in the boxes.



Statement:

5) Write the correct number in the box.

$$8 + \boxed{\phantom{00}} = 10$$

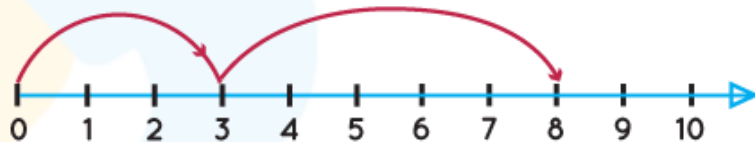


6) Using number line fill the correct numbers in the boxes.

$$\boxed{\phantom{00}} + \boxed{\phantom{00}} = \boxed{\phantom{00}}$$



$$\boxed{\phantom{00}} + \boxed{\phantom{00}} = \boxed{\phantom{00}}$$



7) Fill the box with correct numbers. Represent the addition on number line

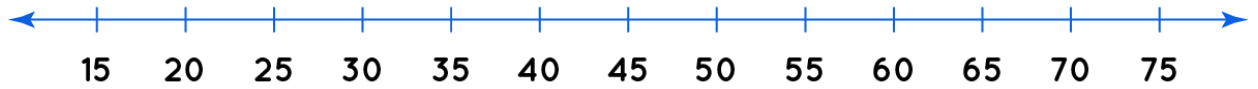
$$135 + 1 + 8 = \boxed{\phantom{000}}$$



8) Write the addition statement using number line.

70, 50, 20


Addition statement:



9) Write the addition statement using number line. Show it.

15, 25, 40

Addition statement:



10) Solve and show the addition on number line.

$614 + 2 + 5 =$



When you learn math  
in an interesting way,  
you never forget.



**25 Million**

Math classes &  
counting

**100K+**

Students learning  
Math the right way

**20+ Countries**

Present across USA, UK,  
Singapore, India, UAE & more.

## Why choose Cuemath?

"Cuemath is a valuable addition to our family. We love solving puzzle cards. My daughter is now visualizing maths and solving problems effectively!"

- Gary Schwartz

"Cuemath is great because my son has a one-on-one interaction with the teacher. The instructor has developed his confidence and I can see progress in his work. One-on-one interaction is perfect and a great bonus."

- Kirk Riley

"I appreciate the effort that miss Nitya puts in to help my daughter understand the best methods and to explain why she got a problem incorrect. She is extremely patient and generous with Miranda."

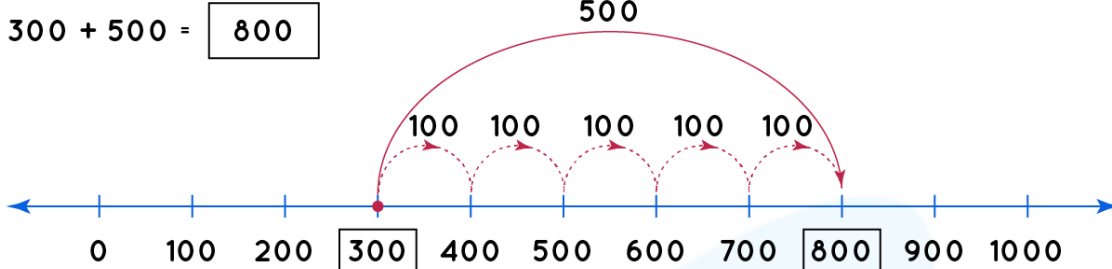
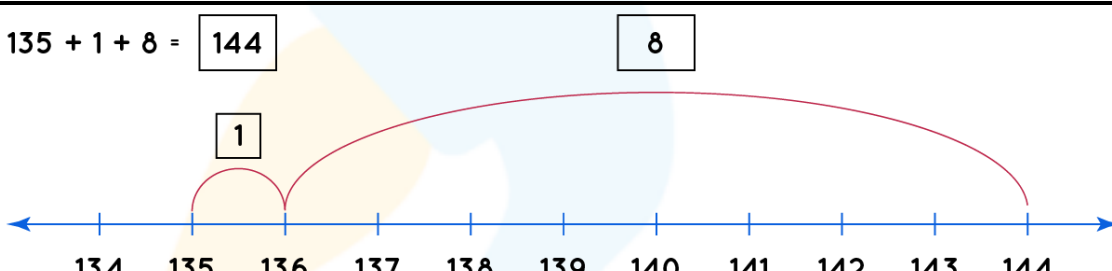
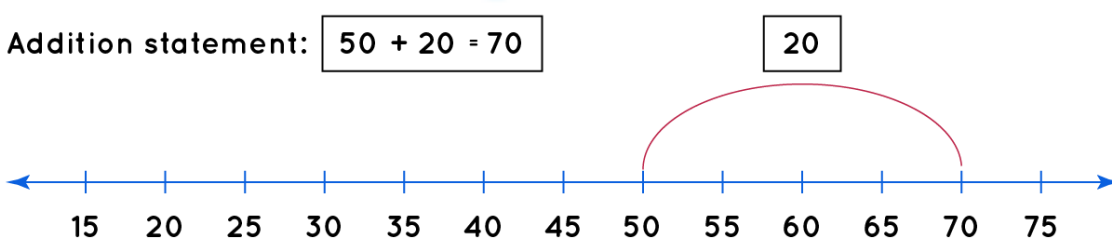
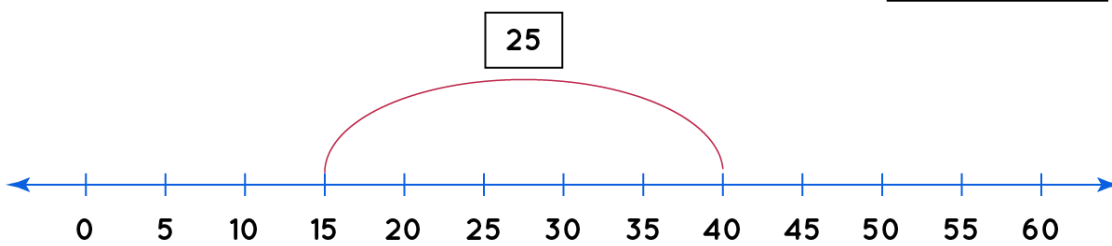
- Barbara Cabrera

Get the Cuemath advantage

**Book a FREE trial class**



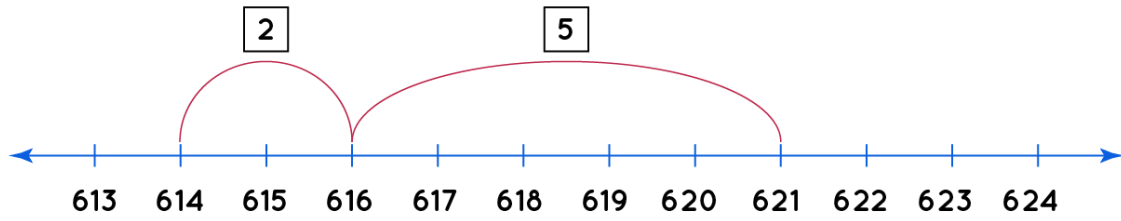
## ANSWERS

1)	$300 + 500 = \boxed{800}$ 
2)	55 Steps
3)	519
4)	$35 + 20 = 55$
5)	$8 + \underline{2} = 10.$
6)	$4 + 2 = 6$ $3 + 5 = 8$
7)	$135 + 1 + 8 = \boxed{144}$ 
8)	70, 50, 20 Addition statement: $50 + 20 = 70$ 
9)	15, 25, 40 Addition statement $15 + 25 = 40$ 



10)

$$614 + 2 + 5 = \boxed{612}$$



## FUN FACT

1. Number line is a straight line with numbers on it.
2. On number line, numbers increases left to right.
3. On number line number decreases right to left.
4. We can perform addition and subtraction together on number line.

