

Get better at Math.  
Get better at  
everything.



Come experience the Cuemath methodology and ensure your child stays ahead at math this summer.



**Adaptive  
Platform**



**Interactive Visual  
Simulations**



**Personalized  
Attention**

For Grades 1 - 10



LIVE online classes  
by trained and  
certified experts.


Get the Cuemath advantage

**Book a FREE trial class**

## ADDING INTEGERS ON A NUMBER LINE WORKSHEET-I

1) Use the number line to find the sum:

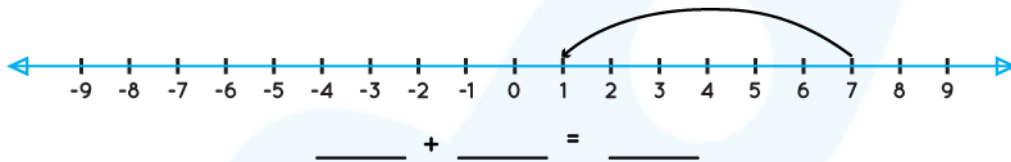
$$4 + (-5)$$



2) Fill in the blank.

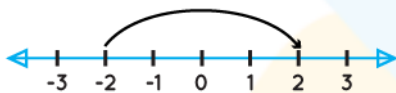
An integer, on the given number line, is greater than every number on it's \_\_\_\_\_.

3) Write the addition equation represented on the following number line:



4) Find the missing term using the number line to satisfy the given equation.

$$-2 + ? = 2$$



5) Compare the following expressions by solving on a number line.

$$4 + (-5) \square 7 + (-6)$$



6) What needs to be added to the number below the arrow to get to the circled answer?



7) When adding positive numbers on a number line, you move to the \_\_\_\_\_.

- a) Left
- b) Right

Use the following number line to answer the Q8 and Q9.

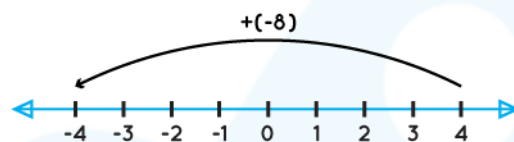
Zero lies between b and c.



8) Find the value of a and b.

9) What are the values of c and d.

10) Find the equation modeled in the given number line.



When you learn math  
in an interesting way,  
you never forget.



**25 Million**

Math classes &  
counting

**100K+**

Students learning  
Math the right way

**20+ Countries**

Present across USA, UK,  
Singapore, India, UAE & more.

## Why choose Cuemath?

"Cuemath is a valuable addition to our family. We love solving puzzle cards. My daughter is now visualizing maths and solving problems effectively!"

- Gary Schwartz

"Cuemath is great because my son has a one-on-one interaction with the teacher. The instructor has developed his confidence and I can see progress in his work. One-on-one interaction is perfect and a great bonus."

- Kirk Riley


"I appreciate the effort that miss Nitya puts in to help my daughter understand the best methods and to explain why she got a problem incorrect. She is extremely patient and generous with Miranda."

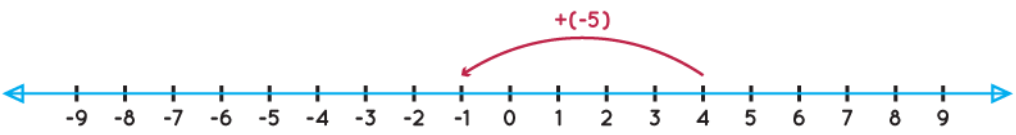
- Barbara Cabrera

Get the Cuemath advantage

**Book a FREE trial class**

## ANSWERS



1)	$4 + (-5) = \underline{-1}$ 
2)	left
3)	$7 + (-6) = 1$
4)	4
5)	<
6)	6
7)	b)
8)	-4, -1
9)	1, 4
10)	$4 + (-8) = (-4)$

## FUN FACT

1. A number line can be extended infinitely in any direction and is usually represented horizontally.
2. The numbers on the number line increase as one moves from left to right and decrease on moving from right to left.
3. Writing numbers on a number line makes comparing numbers easier. Numbers on the left are smaller than the numbers on the right of the number line.

