

Get better at Math.  
Get better at  
everything.



Come experience the Cuemath methodology and ensure your child stays ahead at math this summer.



**Adaptive  
Platform**



**Interactive Visual  
Simulations**



**Personalized  
Attention**

For Grades 1 - 10










LIVE online classes  
by trained and  
certified experts.

Get the Cuemath advantage











**Book a FREE trial class**

## ADDING 3 NUMBERS WORKSHEETS-4

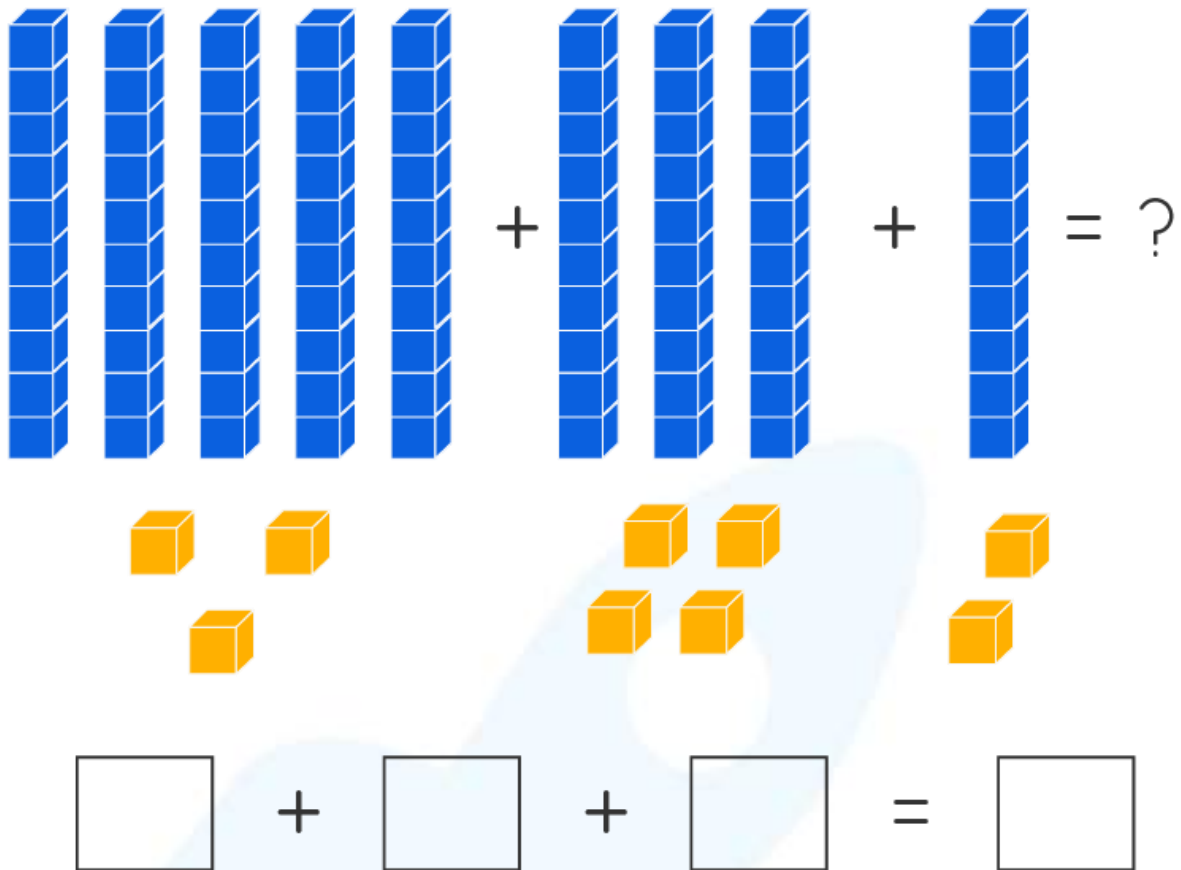
1) Find the total number of pineapples.

2) Find the sum.

  +	     +	   =

3) Find the sum.



4) Fill in the blanks:

a) 5 ones + 5 ones + 4 ones = -----


b) 7 tens + 8 tens + 5 tens = -----

c) 8 tens + 7 tens + 1 ten = -----

5) Sam lit 6 candles, Tim lit 10 candles and Kate lit 6 candles.  
How many did they light in all?



6) Ana collected a few fruits from the garden. Find the total number of fruits collected by her.



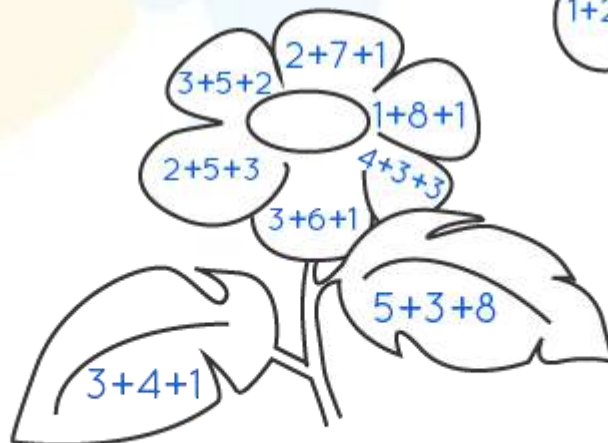
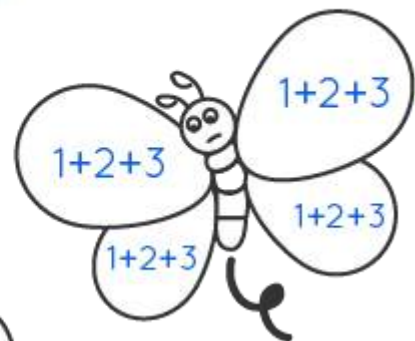
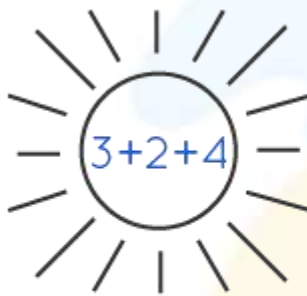
7) Find the sum.

$$\begin{array}{r} 21 \\ 22 \\ + 16 \\ \hline \end{array}$$

8) Find the sum.

$$\begin{array}{r} \square \\ 43 \\ 26 \\ + 12 \\ \hline \end{array}$$

9) Color the picture as directed by the addition statement.



6 = pink    8 = green    9 = yellow    10 = red

10) Match the right sum.

Add

Sum

$23 + 14 + 6$	56
$17 + 23 + 6$	70
$25 + 13 + 18$	46
$24 + 31 + 14$	43





When you learn math  
in an interesting way,  
you never forget.



**25 Million**

Math classes &  
counting

**100K+**

Students learning  
Math the right way

**20+ Countries**

Present across USA, UK,  
Singapore, India, UAE & more.

## Why choose Cuemath?

"Cuemath is a valuable addition to our family. We love solving puzzle cards. My daughter is now visualizing maths and solving problems effectively!"

- Gary Schwartz

"Cuemath is great because my son has a one-on-one interaction with the teacher. The instructor has developed his confidence and I can see progress in his work. One-on-one interaction is perfect and a great bonus."


- Kirk Riley

"I appreciate the effort that miss Nitya puts in to help my daughter understand the best methods and to explain why she got a problem incorrect. She is extremely patient and generous with Miranda."

- Barbara Cabrera


Get the Cuemath advantage

**Book a FREE trial class**

**ANSWERS**

1)	$2 + 4 + 1 = 7$
2)	$2 + 5 + 3 = 10$
3)	9tens + 9 ones =
4)	99a) $5 + 5 + 4 = 14$ b) $7 + 8 + 5 = 20$ c) $8 + 7 + 1 = 16$
5)	22 candles
6)	$7 + 5 + 6 = 18$ fruits



7)	59
8)	81
9)	 <p>6 = pink    8 = green    9 = yellow    10 = red</p>
10)	$23 + 14 + 6$ $17 + 23 + 6$ $25 + 13 + 18$ $24 + 31 + 14$

## FUN FACT

1. “Eleven plus two” is an anagram of “twelve plus one” and the answer to both the statements is 13.
2. ‘+’ sign was discovered as early as 1489 AD.
3. Add numbers from 1 to 100 and your sum will be 5050.

