

Get better at Math.
Get better at
everything.



Come experience the Cuemath methodology and ensure your child stays ahead at math this summer.



**Adaptive
Platform**



**Interactive Visual
Simulations**



**Personalized
Attention**

For Grades 1 - 10



LIVE online classes
by trained and
certified experts.

Get the Cuemath advantage

Book a FREE trial class

4th Grade Line Plot Worksheets

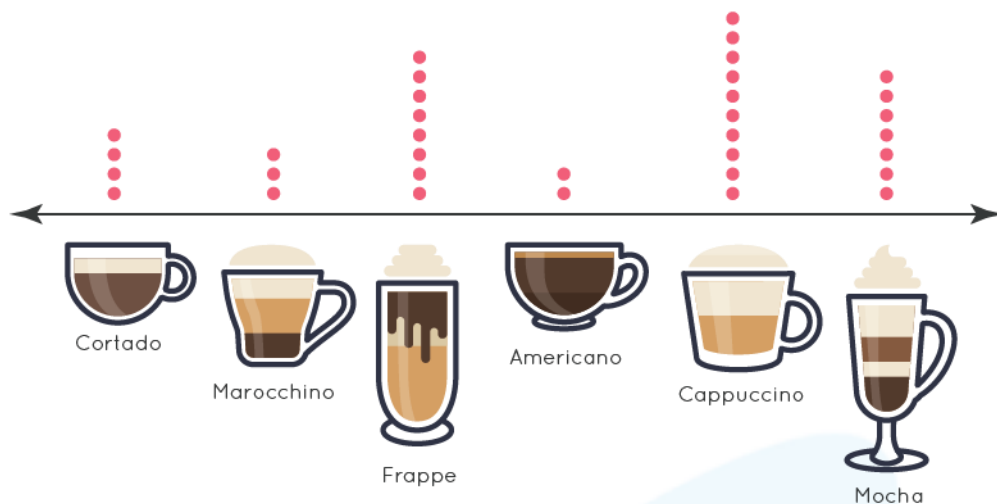
Michael was noticing the colors of the 4 wheelers passing by in the highway. He plotted the variation in the line plot.



Answer the following questions based on the information shown above.

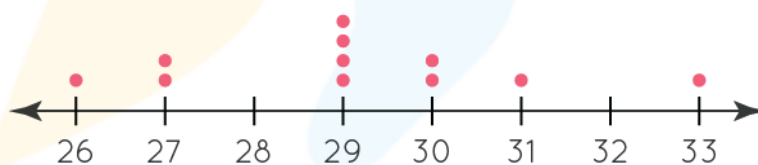
- 1) Find out the number of blue colored vehicles passed him.
- 2) Find out the color of the vehicle which passed him the highest number of times.
- 3) Find out the types of vehicle which passed him more than 6 times.
- 4) Which vehicle passed him the least?

Lucas was serving beverages in coffee shop. Shown below are the types of beverages ordered that day.



- 5) Which beverage sold the least that day?
- 6) Find the number of Frappe sold less than Cappuccino.
- 7) Which of the drink was the most favored of them all?
- 8) Find out the number of Cortado sold that day.

In a class test, marks obtained by the students is noted and plotted in the line plot shown below.



Answer the following question given below.

- 9) Find the number of students that scored more than 30 marks in the test.
- 10) Find the marks which is most achieved.

When you learn math
in an interesting way,
you never forget.



25 Million

Math classes &
counting

100K+

Students learning
Math the right way

20+ Countries

Present across USA, UK,
Singapore, India, UAE & more.

Why choose Cuemath?

"Cuemath is a valuable addition to our family. We love solving puzzle cards. My daughter is now visualizing maths and solving problems effectively!"

- Gary Schwartz

"Cuemath is great because my son has a one-on-one interaction with the teacher. The instructor has developed his confidence and I can see progress in his work. One-on-one interaction is perfect and a great bonus."


- Kirk Riley

"I appreciate the effort that miss Nitya puts in to help my daughter understand the best methods and to explain why she got a problem incorrect. She is extremely patient and generous with Miranda."

- Barbara Cabrera

Get the Cuemath advantage

Book a FREE trial class

**ANSWERS**

1)	7
2)	Red
3)	3
4)	Yellow, and Orange
5)	Americano
6)	2
7)	Cappuccino
8)	4
9)	2
10)	29

FUN FACT

1. The name **Cartesian** comes from the French mathematician and philosopher René Descartes , who worked to merge [algebra](#) and Euclidean geometry.
2. The idea of this system was developed in 1637 in two works by Descartes.
3. **Cartesian coordinate system** is a coordinate system used to place points on a [cartesian plane](#) using two numbers, usually called the *x-coordinate* and the *y-coordinate*.

