

Get better at Math.
Get better at
everything.



Come experience the Cuemath methodology and ensure your child stays ahead at math this summer.



**Adaptive
Platform**



**Interactive Visual
Simulations**



**Personalized
Attention**

For Grades 1 - 10



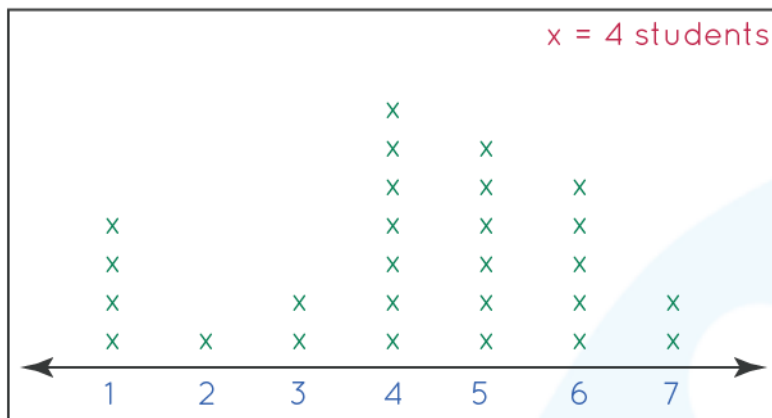
LIVE online classes
by trained and
certified experts.

Get the Cuemath advantage

Book a FREE trial class

4th Grade Line Plot Worksheets

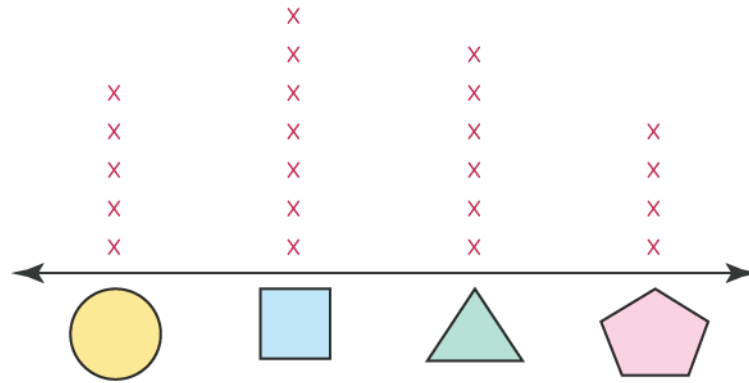
Jenny plotted the variation of students that appeared on different days in the blood donation camp organized in the school. The variation is shown below in line plot.



Answer the following questions based on the information shown above.

- 1) How many students came on the third day?
- 2) Find the total number of students which were available on the second last day of the camp.
- 3) Find out the number of students came for 3 days or less.
- 4) Find the number of days where number of students were higher than 12.

Ronald and his friends drew 4 different shapes on their sheet various times and plotted the types of shapes in the line plot with respect to number of times a single shape came in the sheet.




5) Which shape occurred most?

6) Find the number of times triangle occurred more than circle.

7) Find the number of times a shape occurred which has more sides than a triangle.

8) Which shapes occurred more than 5 times in the sheet?

In a survey, done on a locality, number and types of pets were recorded and plotted in the line plot shown below.



Answer the following question given below.

9) Find the number of dogs more than number of birds in the locality.

10) Match the following:

Type of Pets	Number
1. Dogs	a) 60
2. Birds	b) 50
3. Cats	c) 40
4. Fish	d) 70



When you learn math
in an interesting way,
you never forget.



25 Million

Math classes &
counting

100K+

Students learning
Math the right way

20+ Countries

Present across USA, UK,
Singapore, India, UAE & more.

Why choose Cuemath?

"Cuemath is a valuable addition to our family. We love solving puzzle cards. My daughter is now visualizing maths and solving problems effectively!"

- Gary Schwartz

"Cuemath is great because my son has a one-on-one interaction with the teacher. The instructor has developed his confidence and I can see progress in his work. One-on-one interaction is perfect and a great bonus."


- Kirk Riley

"I appreciate the effort that miss Nitya puts in to help my daughter understand the best methods and to explain why she got a problem incorrect. She is extremely patient and generous with Miranda."

- Barbara Cabrera

Get the Cuemath advantage

Book a FREE trial class

**ANSWERS**

1)	8
2)	20
3)	28
4)	4
5)	Square
6)	1
7)	11
8)	Square, and Triangle
9)	10
10)	1. d 2. c 3. b 4. a

FUN FACT

1. The name **Cartesian** comes from the French mathematician and philosopher René Descartes, who worked to merge [algebra](#) and Euclidean geometry.
2. The idea of this system was developed in 1637 in two works by Descartes.
3. **Cartesian coordinate system** is a coordinate system used to place points on a [cartesian plane](#) using two numbers, usually called the *x-coordinate* and the *y-coordinate*.

