

Get better at Math.
Get better at
everything.



Come experience the Cuemath methodology and ensure your child stays ahead at math this summer.



**Adaptive
Platform**



**Interactive Visual
Simulations**



**Personalized
Attention**

For Grades 1 - 10



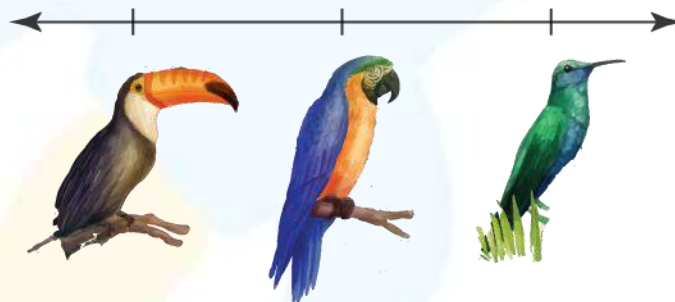
LIVE online classes
by trained and
certified experts.

Get the Cuemath advantage

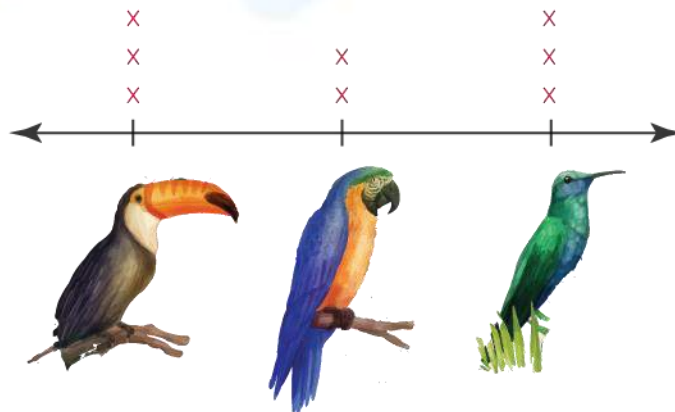
Book a FREE trial class

4th Grade Line Plot Worksheets

1. Emily saw birds in the forest. She took picture of them and is shown below. Make a line plot to show all kinds of birds in the picture.




Answer 1:



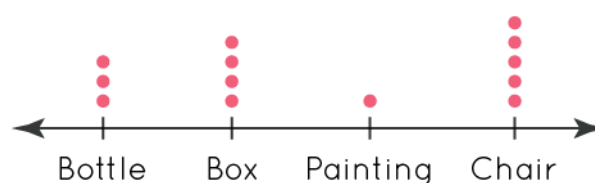
- 1) Felicia and her friends went to the ice-cream parlor and they order different types of ice-creams. Following image shows types or ice-cream they ordered and quantity of each ice-cream. Make a line plot of the given information.

					
3	5	6	1	2	4

Answer:



Damian plotted the number of items in his room in a line plot.

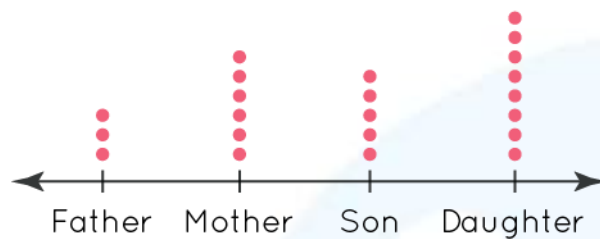


Use this information to answer the question 3, 4 and question 5 given below.

- 2) Find the total number of chairs more than bottles.

- 3) Find the item which is second lowest in quantity.
- 4) Find the number of boxes that are more than painting.

In a family, the number of online shopping applications were counted in each person's phone. Read the given from the line plot, and answer the following questions 6, 7, 8, 9, and 10:



- 5) Who has the maximum number of shopping application in their phone?
- 6) Mother has ___ applications less than ____.
- 7) State whether the given statement is true or false:
 Father has the least amount of shopping applications in his phone.
- 8) Match the following:

1. Father	a) 8
2. Mother	b) 5
3. Son	c) 6
4. Daughter	d) 3

- 10) Find the number of applications more in son's phone than his father.

When you learn math
in an interesting way,
you never forget.



25 Million

Math classes &
counting

100K+

Students learning
Math the right way

20+ Countries

Present across USA, UK,
Singapore, India, UAE & more.

Why choose Cuemath?

"Cuemath is a valuable addition to our family. We love solving puzzle cards. My daughter is now visualizing maths and solving problems effectively!"

- Gary Schwartz

"Cuemath is great because my son has a one-on-one interaction with the teacher. The instructor has developed his confidence and I can see progress in his work. One-on-one interaction is perfect and a great bonus."


- Kirk Riley

"I appreciate the effort that miss Nitya puts in to help my daughter understand the best methods and to explain why she got a problem incorrect. She is extremely patient and generous with Miranda."

- Barbara Cabrera

Get the Cuemath advantage

Book a FREE trial class

**ANSWERS**

1)	
2)	
3)	2
4)	Bottle
5)	3
6)	Daughter
7)	2, Daughter
8)	True
9)	1. d 2. C 3. b 4. a
10)	2

FUN FACT

1. The name **Cartesian** comes from the French mathematician and philosopher René Descartes , who worked to merge [algebra](#) and Euclidean geometry.
2. The idea of this system was developed in 1637 in two works by Descartes.
3. **Cartesian coordinate system** is a coordinate system used to place points on a [cartesian plane](#) using two numbers, usually called the *x-coordinate* and the *y-coordinate*.

