

Get better at Math.
Get better at
everything.



Come experience the Cuemath methodology and ensure your child stays ahead at math this summer.



**Adaptive
Platform**



**Interactive Visual
Simulations**



**Personalized
Attention**

For Grades 1 - 10




LIVE online classes
by trained and
certified experts.

Get the Cuemath advantage

Book a FREE trial class

3rd Grade Shapes Worksheet

1) Select the correct option.



- (a) Open shape
- (b) Closed shape


2) Tick the correct option.



Number of corners:

- (a) 3
- (b) 4

3) Look at the figure and answer the questions.



- (a) Number of faces = ____
- (b) Number of edges = ____
- (c) Number of vertices = ____

4) How many plane faces does a cylinder have?

5) The earth resembles a _____


- (a) Oval
- (b) Sphere

6) Which is shaped like a rectangular prism?

(a)



(b)



(c)



7) Sort the 2D and 3D shapes and list them in the corresponding columns.

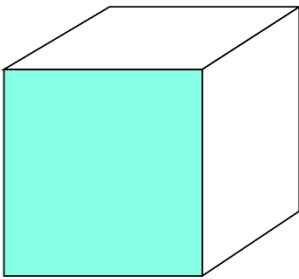
Rectangle, Cone, Pentagonal prism, Sphere, Circle, Triangle, Square pyramid, Star.

| 2D shapes | 3D shapes |
|-----------|-----------|
| | |
| | |
| | |
| | |

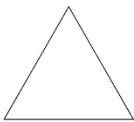
8) A cube has _____ edges.

- (a) 8
- (b) 12
- (c) 16

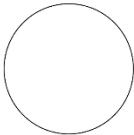
9) Match the basic plane shape with the colored face of the solid shape:



(a)



(b)



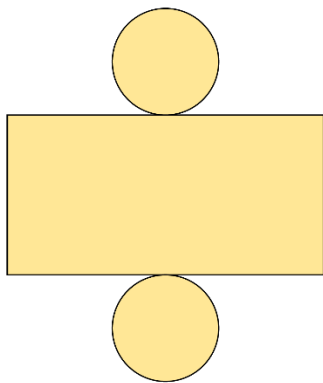
(c)



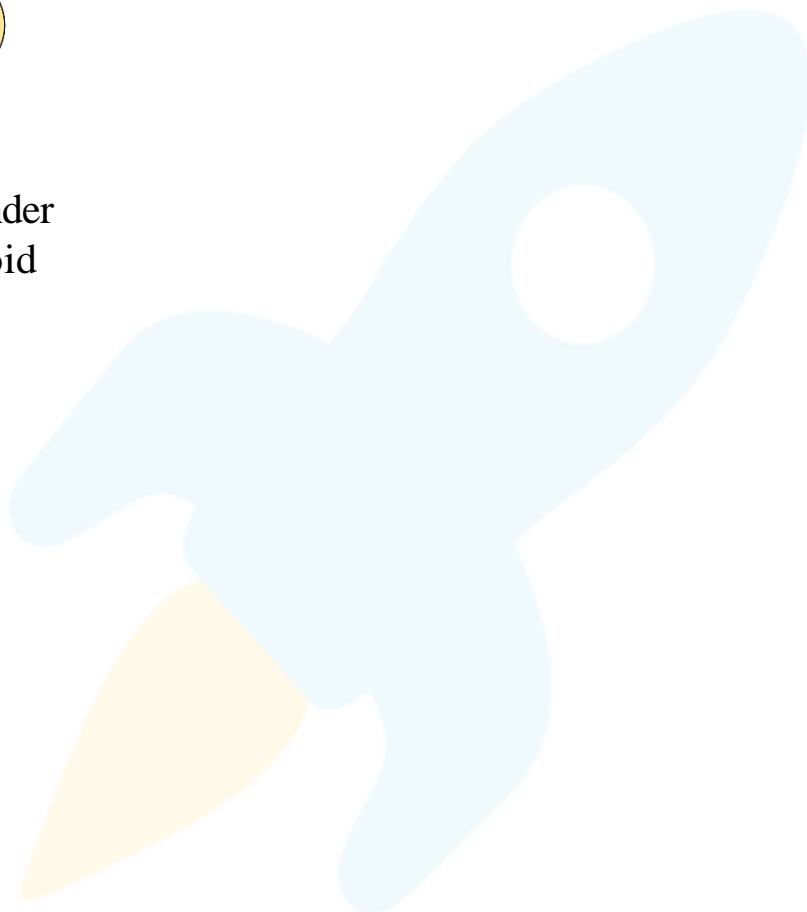
(d)



10) Identify the net of the solid figure.



- (a) Cone
- (b) Cylinder
- (c) Cuboid



When you learn math
in an interesting way,
you never forget.



25 Million

Math classes &
counting

100K+

Students learning
Math the right way

20+ Countries

Present across USA, UK,
Singapore, India, UAE & more.

Why choose Cuemath?

"Cuemath is a valuable addition to our family. We love solving puzzle cards. My daughter is now visualizing maths and solving problems effectively!"

- Gary Schwartz

"Cuemath is great because my son has a one-on-one interaction with the teacher. The instructor has developed his confidence and I can see progress in his work. One-on-one interaction is perfect and a great bonus."

- Kirk Riley

"I appreciate the effort that miss Nitya puts in to help my daughter understand the best methods and to explain why she got a problem incorrect. She is extremely patient and generous with Miranda."

- Barbara Cabrera

Get the Cuemath advantage

Book a FREE trial class

**ANSWERS**

| | |
|-----|---|
| 1) | (b) |
| 2) | (b) |
| 3) | (a) 6 (b) 12 (c) 8 |
| 4) | 2 |
| 5) | (b) |
| 6) | (b) |
| 7) | 2D shapes: Rectangle Circle Triangle Star 3D shapes: Cone Pentagonal prism Sphere Square pyramid |
| 8) | 12 |
| 9) | (c) |
| 10) | (b) |

FUN FACT

1. Quadrilateral shapes are four-sided closed figures made with straight lines.
2. Polygons are closed geometric shapes made of straight lines. They are named after the number of sides they have.
3. Learning about 3D solids will help us in our day-to-day life as most of our activities revolve and depend on them.

