

Get better at Math.
Get better at
everything.



Come experience the Cuemath methodology and ensure your child stays ahead at math this summer.



**Adaptive
Platform**



**Interactive Visual
Simulations**



**Personalized
Attention**

For Grades 1 - 10



LIVE online classes
by trained and
certified experts.

Get the Cuemath advantage

Book a FREE trial class

3d Shapes Worksheets for Grade 1

1) Choose the 3d shape from the following.

- a) square
- b) circle
- c) pyramid
- d) rectangle

2) Choose the odd one out and state the reason.

- a) sphere
- b) prism
- c) circle
- d) cone

3) Identify the 3d shape.



4) Which solid shape does this resemble?




a) Cone

b) cube

c) sphere

5) Choose the right object that does not resemble the shape given.



a)




b)



c)

6) find the number of faces, vertices and edges of the shape shown.



Faces= _____

Veritces= _____

Edges= _____

7) which shape best fits the description?

A shape that has 4 triangular faces, 4 edges and 6 vertices

a) cone

b) pyramid

c) cylinder

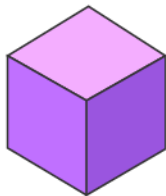
8) Match the 2d shape with the 3d shape.



Cone



Cube



Sphere



Cuboid



Pyramid



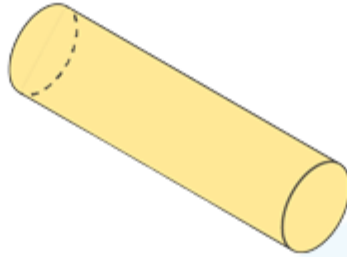
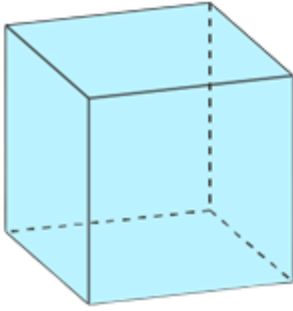
Cylinder

9) Which of these shapes has vertices?

a)

b)

c)



10) Each face of the cube is _____ in shape.

a) circle

b) square

c) triangle

When you learn math
in an interesting way,
you never forget.



25 Million

Math classes &
counting

100K+

Students learning
Math the right way

20+ Countries

Present across USA, UK,
Singapore, India, UAE & more.

Why choose Cuemath?

"Cuemath is a valuable addition to our family. We love solving puzzle cards. My daughter is now visualizing maths and solving problems effectively!"

- Gary Schwartz

"Cuemath is great because my son has a one-on-one interaction with the teacher. The instructor has developed his confidence and I can see progress in his work. One-on-one interaction is perfect and a great bonus."

- Kirk Riley

"I appreciate the effort that miss Nitya puts in to help my daughter understand the best methods and to explain why she got a problem incorrect. She is extremely patient and generous with Miranda."

- Barbara Cabrera

Get the Cuemath advantage

Book a FREE trial class

ANSWERS

1)	c
2)	c Circle is the only 3d shape
3)	Cone
4)	b
5)	c
6)	6 8 12

7)	b
8)	Sphere Cylinder Cube Pyramid Cuboid Cone
9)	a
10)	b

FUN FACT

1. A sphere is a perfectly round 3d shape similar to a round ball you might play soccer or basketball
2. 11 different nets can be used to create a cube.
3. Euler's formula is applied on any polyhedron. Faces + vertices - Edges = 2

