

Get better at Math.  
Get better at  
everything.



Come experience the Cuemath methodology and ensure your child stays ahead at math this summer.



**Adaptive  
Platform**



**Interactive Visual  
Simulations**



**Personalized  
Attention**

For Grades 1 - 10



LIVE online classes  
by trained and  
certified experts.

Get the Cuemath advantage

**Book a FREE trial class**

## 2D Shapes Worksheets for Grade 1-worksheet-3

1. Identify the rectangle and color it.




2. Cut and paste the shapes according to their names


Circle




Square



Pentagon



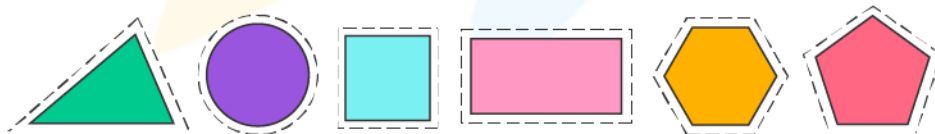
Rectangle



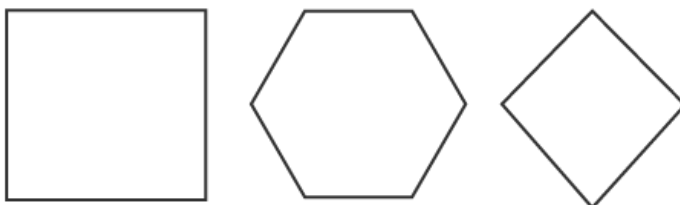
Hexagon



Triangle



3. Color the shapes that have 4 sides.



4. A rectangle has \_\_\_\_\_ sides.

- a) 4                      b) 6                      c) 8

5. A square has \_\_\_\_\_ sides and \_\_\_\_\_ corners. Are the corners straight or slanting? \_\_\_\_\_

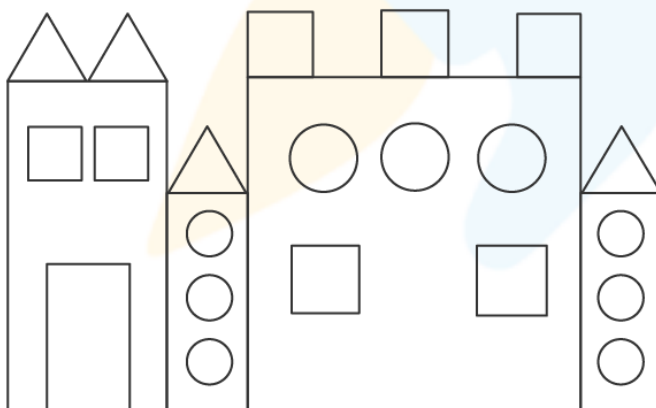


6. Henry joined 2 shapes and created this shape. Which two shapes did he join together?

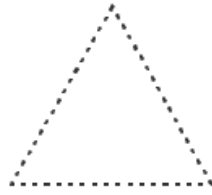


- a) 2 triangles                      b) 2 circles                      c) 2 squares

7. Color the shapes as directed and count them.



8. Trace and color the shapes.



9. a) I only have 3 sides and 3 corners. Who am I? \_\_\_\_\_

b) I have no sides and I am round. Who am I? \_\_\_\_\_

10. Construct a square with 4 triangles.

When you learn math  
in an interesting way,  
you never forget.



**25 Million**

Math classes &  
counting

**100K+**

Students learning  
Math the right way

**20+ Countries**

Present across USA, UK,  
Singapore, India, UAE & more.

## Why choose Cuemath?

"Cuemath is a valuable addition to our family. We love solving puzzle cards. My daughter is now visualizing maths and solving problems effectively!"

- Gary Schwartz

"Cuemath is great because my son has a one-on-one interaction with the teacher. The instructor has developed his confidence and I can see progress in his work. One-on-one interaction is perfect and a great bonus."


- Kirk Riley

"I appreciate the effort that miss Nitya puts in to help my daughter understand the best methods and to explain why she got a problem incorrect. She is extremely patient and generous with Miranda."

- Barbara Cabrera

Get the Cuemath advantage


**Book a FREE trial class**

**SOLUTIONS**

Complete solution/explanation

**2d shapes worksheets for grade 1-worksheet3****1.****2. Cut and paste the shapes according to their names**

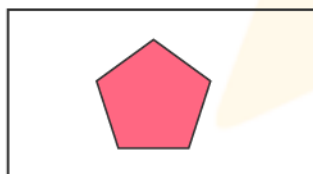
Circle




Square



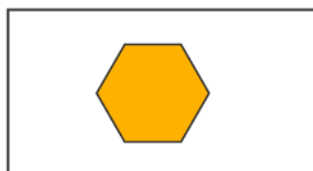
Pentagon



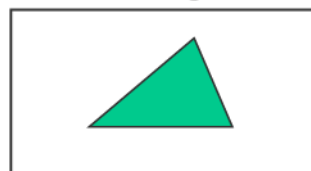
Rectangle



Hexagon



Triangle


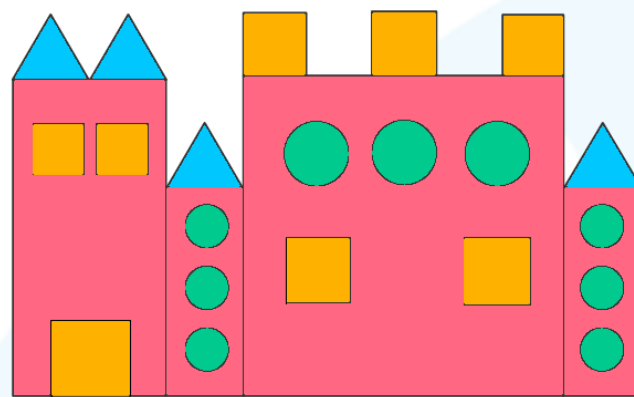
**3. Shapes that have 4 sides**

4. A rectangle has 4 sides.




5. A square has 4 sides and 4 corners. All the corners are straight.

6. Henry created the Rectangle using 2 Triangles

7. Color and count the shapes




8. Trace and color the shapes



9. a) I am a triangle.  
b) I am a circle.

10. Construct a square with 4 triangles.





**FUN FACT**

1. 2d shapes fit inside a plane.
2. 2d shapes don't have height. They have only length and the width.
3. They have any number of sides made of straight lines or curves.
4. Myriagon is a 2D shape with 10,000 sides; it is the biggest known 2d shape

