

Get better at Math.
Get better at
everything.



Come experience the Cuemath methodology and ensure your child stays ahead at math this summer.



**Adaptive
Platform**



**Interactive Visual
Simulations**



**Personalized
Attention**

For Grades 1 - 10




LIVE online classes
by trained and
certified experts.

Get the Cuemath advantage

Book a FREE trial class

2d and 3d Shapes Worksheet - 1

1) Which shape is this?



a) Rectangle

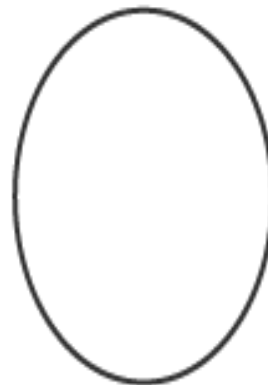

b) square

c) circle

2) Identify the rectangle and color it.

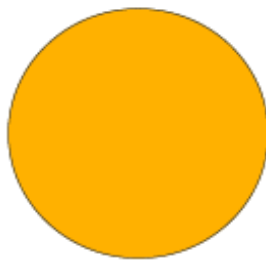



3) Color the shapes that have curved sides.



4) Tick the shapes that have sides.









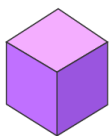




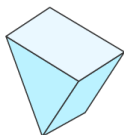
5) A) Is square a quadrilateral?

B) Is triangle a quadrilateral?

6) Ryan made a solid shape which has 5 faces and 6 vertices.
What shape has he made?



Cube



Triangular
Prism

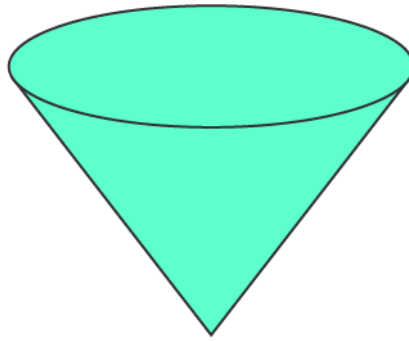


Cylinder




Cone

7) Identify the shape.



8) Circle the object that resembles the solid shape shown.



9) 3D shapes have only length and Width. State (T/F)

10) Make a triangle with 3 triangles.

When you learn math
in an interesting way,
you never forget.



25 Million

Math classes &
counting

100K+

Students learning
Math the right way

20+ Countries

Present across USA, UK,
Singapore, India, UAE & more.

Why choose Cuemath?

"Cuemath is a valuable addition to our family. We love solving puzzle cards. My daughter is now visualizing maths and solving problems effectively!"

- Gary Schwartz

"Cuemath is great because my son has a one-on-one interaction with the teacher. The instructor has developed his confidence and I can see progress in his work. One-on-one interaction is perfect and a great bonus."


- Kirk Riley

"I appreciate the effort that miss Nitya puts in to help my daughter understand the best methods and to explain why she got a problem incorrect. She is extremely patient and generous with Miranda."






















- Barbara Cabrera

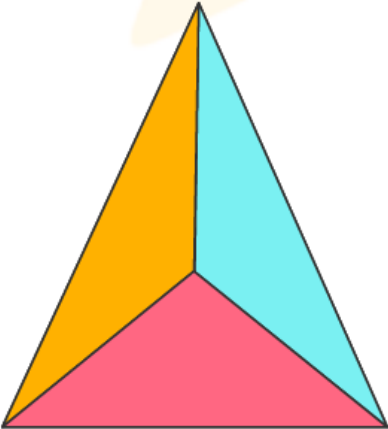
Get the Cuemath advantage

Book a FREE trial class



ANSWERS

1)	b) square
2)	     
3)	  
4)	<div>    </div> <div>    </div> <div>    </div> <div>    </div>

5)	Yes. A square is a quadrilateral. No a triangle is not a quadrilateral.
6)	Triangular prism
7)	Cone
8)	Book
9)	False. 3d shapes also have the dimension height.
10	

FUN FACT

1. 2D shapes are flat.
2. 3D shapes are solid shapes.
3. Triangles are the strongest shape in the world.

